

Powered By: www.manyamfranchise.com

Menu:

1. Social
2. Science
3. Mathematics
4. English
5. Kiswahili
6. Reading

STEGA SERIES
STD 2 TERM 3 2014
SOCIAL STUDIES

NAME _____

DATE _____

1. Animals kept at home are called _____ animals.

(wild, domestic, home)

2. Rain comes from the _____.

(soil, clouds, air)

3. A _____ is a happy celebration.

(burial, funeral, wedding)

4. Our National Anthem is written in _____ languages.

(3,2,4)

5. When we play with other pupils at school, we feel _____.

(happy, sad, unhappy)

6. Children need _____ to grow.

(T.V, car, food)

7. A _____ is found in our school.

(mountain, flag, river)

8. Many trees growing together form a _____.

(hill, forest, rain)

9. A building where food is cooked is called _____.

(bedroom, dining, kitchen)

10. The sign below means _____ ahead.



(road, bumps, pedestrians)

11. We should _____ the school rules.

(obey, disobey, hate)

12. People who come to see wild animals are called _____.

(strangers, visitors, tourists)

13. We get timber from _____.

(trees, stones, water)

14. A low area between two hills is called _____.



(valley, swamp, bridge)

15. We keep the school property in the _____.

(class, store, kitchen)

17.



This is a _____
(granary, hut, toilet)

18. People should cross the road at _____ crossing.

(road, zebra, bridge)

19. The bottom colour on our National Flag is _____.

(black, green, white)

20. Our parents give us food, shelter and _____.

(radio, cars, clothes)

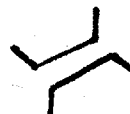
21. Games are played in the _____.

(class, field, hospital)

22. Desks, tables and chairs are called _____.

(furniture, crops, boxes)

23. This is a _____.



(hill, bridge, valley)

24. Father, mother and children make up a _____ family.

(nuclear, extended, single)

25. Pupils enter the school through the _____.

(fence, door, gate)

26. Cyclists are people who ride _____.

(cars, bicycles, buses)

27. People cross the road at a _____.

(zebra crossing, bush, garden)

28. We get firewood from the _____.

(house, forest, river)

29. A _____ shows us how to read and write.

(doctor, farmer, teacher)

30. The weather is _____.



STEGA SERIES
STD 2 TERM 3 2014
CRE

NAME _____

DATE _____

1. When we _____ we make our parents happy.
(play, obey, cry)
2. The _____ gives us light.
(water, land, sun)
3. Jesus had _____ disciples
(10,8,12)
4. Another name for Dorcas was _____
(Tabitha, Mary, Magdalene)
5. David was the son of _____.
(Abraham, Isaac, Jacob)
6. The greatest commandment is _____
(obey, love, respect)
7. Our National Anthem song is a ____
(dance, prayer, fight)
8. The wounded man was helped by a good _____
(murderer, robber, samaritan)
9. Jesus turned _____ into wine.
(beer, water, milk)

- (satan, Jesus, God)
11. Jesus _____ the sick people.
(killed, healed, beat)
 12. It is our christian duty to ____ our parents.
(abuse, love, hate)
 13. When we pray we talk to _____
(Heavens, God, Friend)
 14. David had a son called _____.
(Solomon, Saul, Jonathan)
 15. Muslims worship in a _____
(Church, Temple, Mosque)
 16. God created man on the _____ day.
(5th, 6th, 7th)
 17. Jesus _____ little children.
(loves, hates, fights)
 18. _____ baptised Jesus.
(Peter, John, Adrew)
 19. During christmas we celebrate the _____ of Jesus.
(birth, resurrection, coming)

STEGA SERIES
STD 2 TERM 3 2014

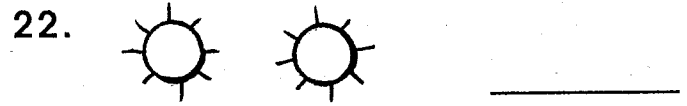
SCIENCE

NAME _____ DATE _____

1. _____ are used to make work easier.
(sufuria, wheels, sticks)
2. Strong wind can blow off the _____ of houses.
(windows, roofs, doors)
3. A _____ is plucked to produce sound.
(drum, guitar, horn)
4. The best soil for modelling is.
(clay, sand, loam)
5. A _____ is a useful animal.
(wasp, grasshopper, bee)
6. All rubbish should be thrown in a _____.
(toilet, class, dust bin)
7. A _____ has a bad smell.
(rotten egg, soap, ripe banana)
8. We should not share a _____.
(food, bed, handkerchief)
9. Kites fly well when the weather is _____.
(calm, sunny, windy)
10. Seeds are planted in the

11. A human being has _____ senses.
(3,4,5)
12. Dirty feet have small harmful animals called _____.
(jiggers, spiders, fleas)
13. We use _____ to chew food.
(stick, beak, lips)
14. The growing of a new plant is called _____.
(germination, weeding, coming)
15. Removal of unwanted plants is called _____.
(seedling, seeds, weeding)
16. A fish breathe through the _____.
(scales, fins, gills)
17. When you look in the mirror you see your _____.
(shadow, image, face)
18. Broken bottles should be _____.
(burnt, buried, kept)
19. A tick has _____ legs.
(6, 8, 4)

The weather is



(sunny, windy, cloudy, rainy, calm)

23. Which plant has big leaves?
(banana, maize, beans)

24. We wear gumboots on a ____ day.
(hot, sunny, rainy)

25. The body of a hen is covered with _____
(scales, feathers, hair)

26. _____ is a natural source of light.
(stars, lamp, torch)

27. Too much rain causes _____.
(floods, drought, sunshine)

28. Animals kept at home are called _____ animals.
(wild, domestic, home)

29. A hen gives us meat and _____.
(milk, eggs, honey.)

30. The flag is waving. The weather is _____.
(windy, sunny, cloudy)

31. Removing weeds from the shamba is called _____.
(weeding, germinating, planting)

32. This is a _____ leaf.



(maize, bean, banana)

33. A _____ guards our homes.

(cow, dog, hen)

34. A zebra is _____.
(a plant, an animal, a stone)


35. The best soil for farming is _____.
(clay, loam, sand)

36. We should wash our hands _____ eating.
(before, after)

37. The mouth of a bird is called _____.
(mouth, beak, gills)

38. A _____ germinates and becomes a new plant.
(leaf, seed, fruit)

Name the parts of a plant



(Roots, flower, stem, leaf)

43. Wild animals live in the _____.
(house, forest, grass)

44. When the weather is _____ we put on gumboots.
(cloudy, rainy, windy)

45. A windmill is turned by _____.
(Rain, Sun, Wind)

46. Separating things from water is called _____.
(boiling, filtering, removing)

47. Plants feed with their _____.
(stems, roots, leaves)

48. Removing things from water is called _____.
(boiling, filtering, cooking)

49. We model using _____ soil.
(wet, dry, stone)

50. Soil can be modelled into balls and _____

STEGA SERIES

STD 2 TERM 3 2014

MATHEMATICS

NAME _____ DATE _____

1. 801 in words is

2. Five hundred and sixty one in symbols _____
3. $47 - 18 =$ _____
4. $24 + 12 + 13 =$ _____
5. $600 + 30 + 9 =$ _____
6. $88 =$ _____ $+$ 8
7. Which number comes before 370?

8. $\square - 20 = 30$
9. 748 = _____ hundreds _____ tens
_____ ones.
10. $73 + 37 =$ _____
11. $199 - 25 =$ _____
12. 0000000
0000000
_____ \times _____ = _____
13. $0 \times 8 =$ _____
14. A plate costs sh 10. What is the cost of two plates?
15. sh cts
48 25
+ 15 15

17. $5 \times 6 =$ _____
18. 4 weeks = _____ days.
19. $999 - 399 =$ _____
20. $27 - 13 =$ _____
21. $\square \div 2 = 8$
22. $81 - \square = 66$
23. 320
+ 189

24. 469
+ 231

25. John had 299 goats. 200 goats died. How many goats remained?
26. How many wheels do four cars have? _____
27. Share 36 oranges among nine children. Each will get? _____
28. 2 years = _____ months.
29. Take away 17 from 67?
30. $9 + \square = 9$
31. Arrange from the largest to the


84, 92, 81, 108, 76, 97

Name the shapes

32.



33.



34. John had 230 goats. 100 goats died. How many goats remained?

35. I had 16 sweets. My aunt gave me 36 more sweets. How many sweets did I have altogether? _____

36. 6 goats have _____ eyes.

37. 6 hundreds 4 tens 2 ones = _____

38. $298 - 146 =$ _____

39. Which one is the biggest?

441 Or 414?

40. 9 tens = _____

41. Which one holds more A or B?



A



B

42. What is the next number?

3, 6, 9, _____

Put +, _____, x, ÷

43. $20 \square 20 = 40$

44. $75 \square 25 = 50$

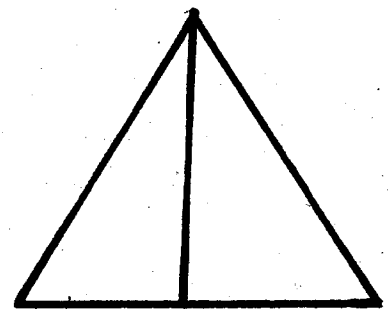
45. $21 \square 7 = 3$

46. $8 \square 3 = 24$

47. 3 cows have _____ legs.

48. $\square + 60 =$ _____

49. How many triangles can you see?



50. $8 \times 0 =$ _____

STEGA SERIES
STD 2 TERM 3 2014
ENGLISH

NAME _____

DATE _____

Dictation

1. _____
2. _____
3. _____
4. _____
5. _____

Write the opposite

6. Big _____
7. Full _____
8. Sit _____
9. Rich _____
10. Sell _____

Write In words

11. 106 _____
12. 0 _____
13. 420 _____

15. 56 _____

Add - ing

16. step _____
17. call _____
18. cut _____
19. sleep _____
20. shake _____

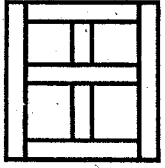
Underline the doing word

21. They are reading story books.
22. My mother is washing clothes.
23. The children were playing foot ball.
24. Our teacher is writing on the board.
25. The cat was drinking milk.

Name the following.

26. 


27.



28.



29.



Fill in the missing letters

30. B _ _ _ K

31. sh _ _ _ ld _ _ _ r.

32. p _ _ nc _ _ _ l.

33. t _ _ _ _ ch _ _ _ r.

34. fr _ _ _ nd.

Write the past tense.

Yesterday

35. drive _____

36. stand _____

37. look _____

38. see _____

Read the story and answer the questions

Omolo is a fisherman. He goes fishing in the lake. He catches alot of fish.

40. _____ is a fisherman.

41. He goes fishing in the _____

42. He catches alot of _____

(fish, lake Omolo)

Write the plural

43. wolf _____

44. lorry _____

45. bench _____

46. shoe _____

Complete the sentences

47. Grass is _____ in colour.

(blue, green blue)

48. A baby dog is called _____

(calf, puppy, kitten)

49. The second month of the year is

(November, February, January)

50. We sit _____ chair.

STEGA

SERIES

11

STEGA SERIES

KISWAHILI MUHULA WA TATU

DARASA LA PILI 2014

JINA _____

TAREHE _____

Imla

1. _____
2. _____
3. _____
4. _____
5. _____

Andika Kinyume

6. Cheka _____
7. Nenda _____
8. Panda _____
9. Kimbia _____
10. Babu _____

Kanusha

(Mfano- Cheza- Usicheze

11. Ongea _____
12. Cheka _____
13. Tembea _____
14. Omba _____
15. Lala mkekani _____

Andika kwa maneno au kwa nambari

16. 235 _____

18. 51 _____

19. Watoto 148 _____

20. 96 _____

Andika kwa wingi

21. Mkate _____


22. Chura _____


23. Uzi _____

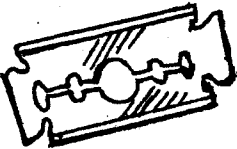
24. Kalamu _____


25. Shamba _____

Andika majina ya picha hizi

26.  _____

27.  _____

28.  _____

29.  _____

Tumia na, ta, li

30. Chakula _____ pikwa sasa.
31. Ugali U _____ pikwa jana.
32. Jana tu _____ enda kanisani.
33. Matunda ya _____ uzwa
sokoni kesho.
34. Vitabu vi _____ nunuliwa jana

Andika kwa wakati ujao

Mfano: Juma anapika

Juma atapika


35. Ninaenda shuleni

36. Dada anafagia nyumba

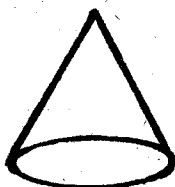
37. Mtoto anacheza mpira

Taja maumbo haya

38.



39.





40

Kamilisha methali na

vitendawili

41. Kuku wangu amezaliwa miibani

42. Anayenikatakata hulia
mwenyewe _____
43. Bendera hufuata _____
44. Kila niendapo hunifuata _____
(upepo, kitunguu, nanasi,
kivuli)

Soma hadithi na ujibu maswali

Nyumba yetu ni ya mawe.

Kuta zake ni za mawe. Nyumba yetu
ina madirisha manne na milango miwili.

Nyumba yetu ina nyumba vinne.

45. Nyumba yetu ni ya _____

46. Nyumba yetu ina madirisha na


47. _____ zake ni za mawe.

48. Nyumba yetu ina _____ vinne.

49. Nyumba yetu ina madirisha _____

(vyumba, manne, kuta,

milango, mawe)



50. Ni saa _____ kamili.

STEGA SERIES
STD 2 TERM 3 2014
READING

NAME _____

DATE _____

READ THESE WORDS

1. Switch
2. Hedge
3. Porridge
4. Sausages
5. Flask
6. Seed
7. Mouse
8. Vegetables
9. Fur
10. Fare

READ THE SENTENCES

11. Ndunge is eating.
12. The headteacher is inside her office.
13. John is standing at the door step.
14. Do you grow pawpaws or pineapples.
15. She has toothpaste on her tooth brush.

PASSAGE

One day Hyena went looking for food. He walked up the hill. He looked under the bushes. There was no food. He became hungry. He walked along and caught a hare.

MUHULA WA TATU 2014
KUSOMA DARASA LA PILI

SOMA MANENO HAYA

1. Maharagwe
2. Mende
3. Mhunzi
4. Kusawasisha
5. Trekta
6. Blanketi
7. Mstatili
8. Hospitali
9. Kilemba

SOMA SENTENSI HIZI

11. Askali pori anawatembeza watalii.
12. Hatuna redio kubwa bali tuna ndogo tu.
13. Shangazi alimnunulia Kibe baiskeli nyekundu.
14. Tuliwaona wanyama wakubwa.
15. Mariamu ni mwanafunzi mwenye adabu njema

KIFUNGU

Kambo ni rafiki yangu sana. Yuko kwenye darasa la pili. Anakuwa na kichwa kigumu kama paka. Ameanza kuwa na tabia mbaya. Pesa zikipotea, watu husema ni veve amaiba