

**SIGNAL EXAMS 2018**  
**LANGUAGE ACTIVITIES**

<b>NAME:</b>	
<b>SCHOOL:</b>	

**1. Fill in the missing letters.**

P \_\_\_ ase

S \_\_\_ rr \_\_\_

E \_\_\_ cus \_\_\_ m \_\_\_

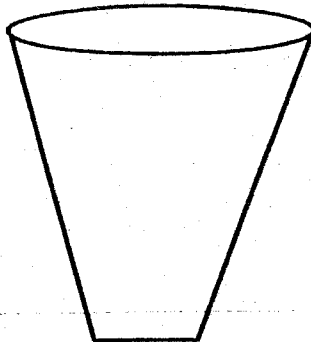
Th \_\_\_ n \_\_\_ y \_\_\_

M \_\_\_ y \_\_\_ l

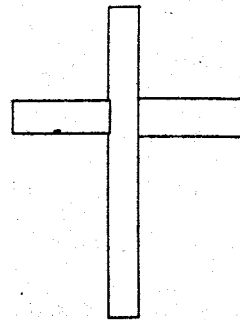
**2. Name and colour the pictures with 'ss' sound.**



dr \_\_\_\_\_



gl \_\_\_\_\_



cr \_\_\_\_\_

**3. Read the story below and circle the words with 'oo' sounds.**

Mother uses a broom to sweep. She is very happy. Mother cooks well. Food is ready. I take my spoon. I take my book to read.

**4. Write their plural.**

One bag                      Two \_\_\_\_\_

One bell                     Four \_\_\_\_\_

One teacher                Three \_\_\_\_\_

One pen                      Six \_\_\_\_\_

One house                  Five \_\_\_\_\_

**5. Draw and colour members of your family.**

Father	Mother
--------	--------

**6. Re-write in a good handwriting.**

Morning - \_\_\_\_\_

Noon - \_\_\_\_\_

Breaktime - \_\_\_\_\_

Midday - \_\_\_\_\_

Weekend - \_\_\_\_\_

**SIGNAL EXAMS 2018**

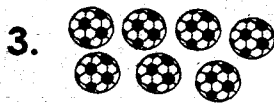
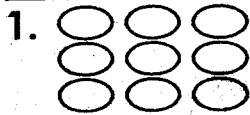
**Early Grade Mathematics**

**Grade 1**

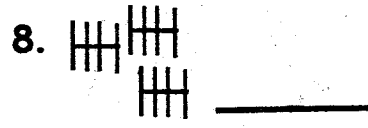
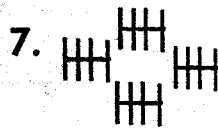
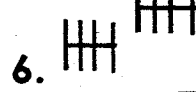
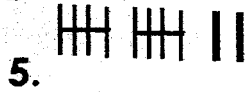
**Term 2**

**Mathematics**

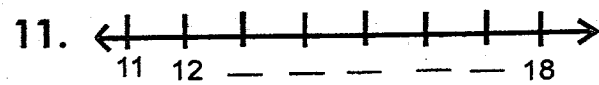
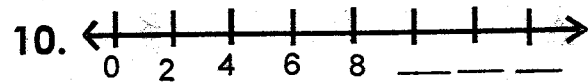

**Count and write.**



**Count the tallies.**



**Write the missing numbers.**



**Write in words.**

- 12. 8 - \_\_\_\_\_
- 13. 9 - \_\_\_\_\_
- 14. 20 - \_\_\_\_\_
- 15. 30 - \_\_\_\_\_
- 16. 11 - \_\_\_\_\_
- 17. 6 - \_\_\_\_\_
- 18. 0 - \_\_\_\_\_

**Add.**

- 19.  $20 + 20 + 10 =$
- 20.  $16 + 6 + 4 =$
- 21.  $19 + 3 + 2 =$
- 22.  $12 + 11 + 10 =$
- 23.  $14 + 16 + 6 =$

**Subtract.**

- 24.  $14 - 6 - 2 =$
- 25.  $12 - 10 =$
- 26.  $24 - 0 - 10 =$
- 27.  $36 - 6 - 30 =$



28.  $20 - 18 - 1 =$

29.  $10 \div 6 - 2 =$

Circle the smaller number.

30. 8                      18

31. 19                     29

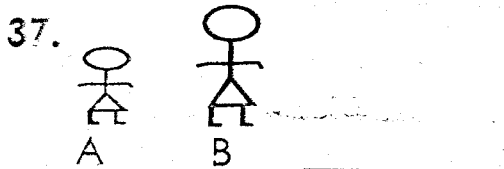
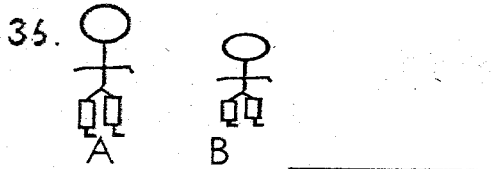
32. 46                     36

33. 32                     21



34. 18                     10

35. 14                     0

Who is taller?



Which one is bigger?



41. 8 boys have \_\_\_\_\_ hands.

42. 6 girls have \_\_\_\_\_ legs.

43. 2 men have \_\_\_\_\_ heads.

44. 4 donkeys have \_\_\_\_\_ ears.

Write numbers from:

45. 14 to 21

\_\_\_\_\_

46. 26 to 31

\_\_\_\_\_

47. 42 to 46

\_\_\_\_\_


48. 51 to 58

\_\_\_\_\_

Which one is bigger?



50.



A

B


\_\_\_\_\_

**SIGNAL EXAMS 2018**

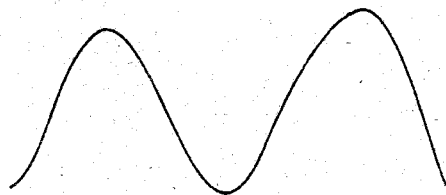
**MOVEMENT AND CREATIVE ACTIVITIES**

<b>NAME:</b>	
<b>SCHOOL:</b>	


**1. Name the shapes and patterns.**



\_\_\_\_\_



\_\_\_\_\_



\_\_\_\_\_

**2. Fill in the blank spaces.**

Sacred songs are sung to praise \_\_\_\_\_. (**God, teachers**)

Songs sung to sooth a baby to sleep are called \_\_\_\_\_.

(**lullabies, cultural**)

**3. Colour the picture and name the activity.**



(**Jumping, Walking, Sliding**)

**SIGNAL EXAMS 2018**  
**KISWAHILI ACTIVITIES**

<b>NAME:</b>	
<b>SCHOOL:</b>	

**1. Linganisha tarakimu na jina.**

- |   |       |
|---|-------|
| 6 | Nne   |
| 2 | Saba  |
| 4 | Tisa  |
| 7 | Mbili |
| 9 | Sita  |

**2. Chora vifaa hivi vya darasani.**

rula	penseli	ubao

3. Unda majina kutokana na sauti hizi.

j - \_\_\_\_\_

g - \_\_\_\_\_

s - \_\_\_\_\_

r - \_\_\_\_\_

4. Paka rangi kwenye majina ya siku za wiki.

a	l	h	a	m	i	s	i
j	u	m	a	p	i	l	i
v	s	e	i	c	t	s	p
a	j	u	m	a	n	n	e
v	l	h	t	i	k	a	s
t	h	i	j	u	m	a	a
j	u	m	a	m	o	s	i

5. Soma hadithi ifuatayo kisha ujibu maswali.

Mzee chura huishi katika kidimbwi. Kidimbwi hicho kina maji mengi. Mzee chura ana watoto sita. Yeye huwalelea watoto wake kule majini. Pia, mzee chura anapenda kuimba nyimbo tamu sana. Yeye huimba jioni jua linapotua. Hata hivyo, sauti yake ni mbaya sana.

a. Mzee chura huishi wapi? \_\_\_\_\_

b. Kidimbwi hicho kina maji \_\_\_\_\_.

c. Mzee chura ana watoto wangapi? \_\_\_\_\_

d. Mzee chura hupenda kufanya nini? \_\_\_\_\_

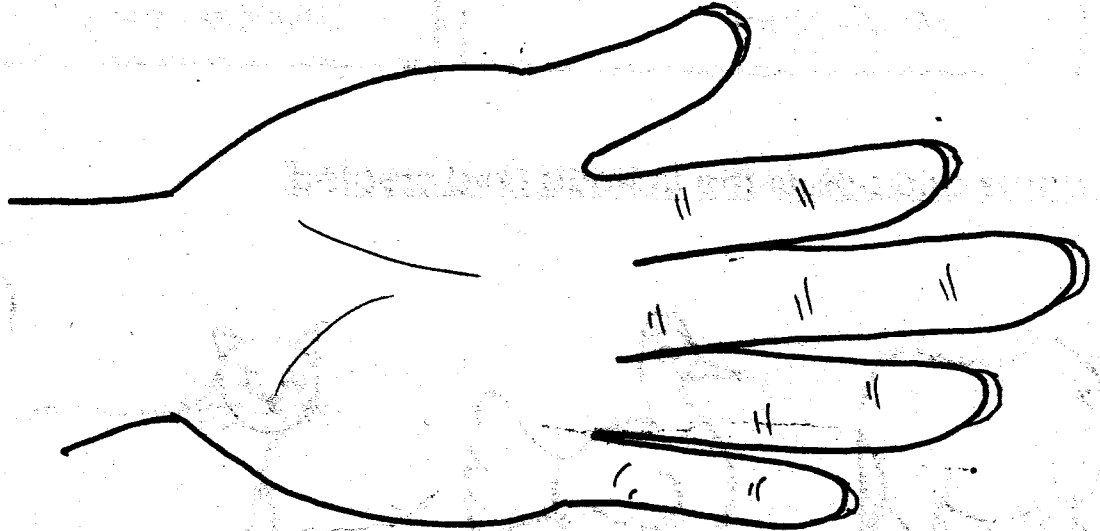
e. Sauti ya mzee chura ni \_\_\_\_\_.

**SIGNAL EXAMS 2018**

**CHRISTIAN RELIGIOUS EDUCATION ACTIVITIES**

<b>NAME:</b>	
<b>SCHOOL:</b>	

1. Write the name of your friend in the palm.



2. Tick the correct answer.

God knows me by my \_\_\_\_\_. (colour, name)

I look like \_\_\_\_\_. (cow, God)


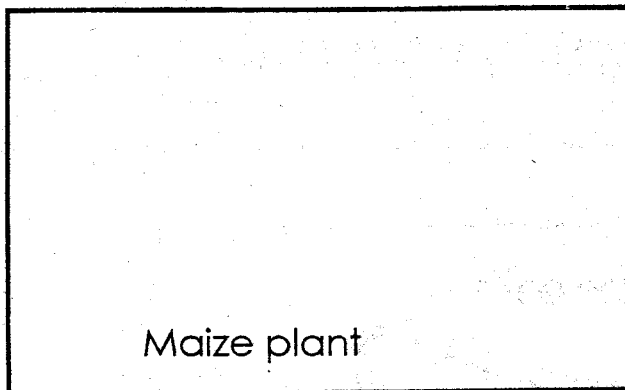
God wants me to \_\_\_\_\_ others. (hate, love)

The Bible has \_\_\_\_\_ parts. (3, 2)




Joseph had \_\_\_\_\_ brothers. (11, 5)



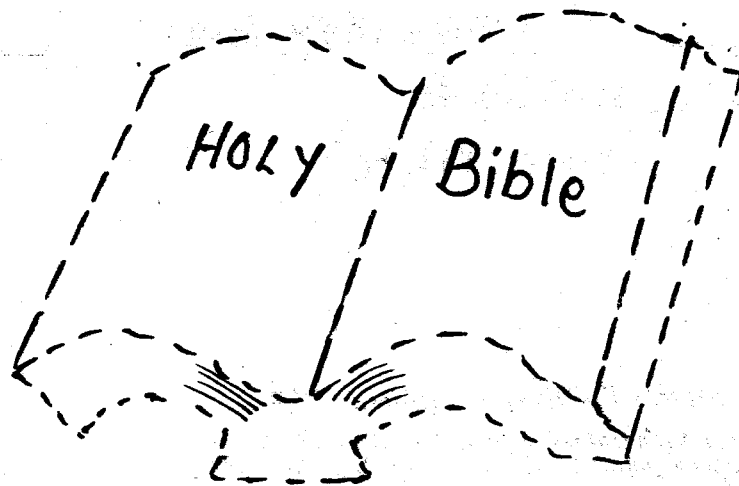
3. Draw the plants found in your compound.



4. Name and colour the animals God created.



5. Join dots and colour.



**SIGNAL EXAMS 2018**  
**ENVIRONMENTAL ACTIVITIES**

<b>NAME:</b>	
<b>SCHOOL:</b>	


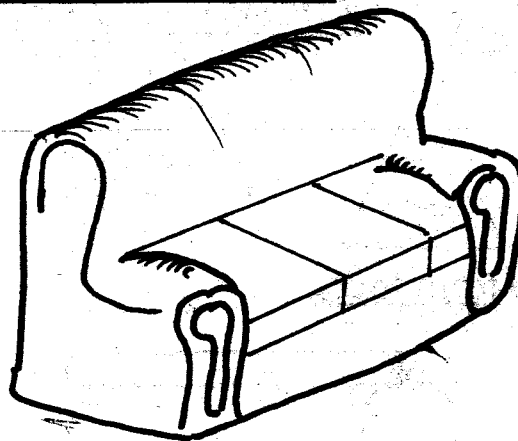

1. Draw parts of a plant.

Leaf	Roots	Fruit

2. Making things from soil is called \_\_\_\_\_.

(building, modelling, creating)

3. Colour the things we model from soil.



© Signal Publishers Limited 2018

Cell: 0722424484/ 0710326410 Mombasa Office: 0712345187


Website: [www.signalpublishers.com](http://www.signalpublishers.com). Email: [info@signalpublishers.com](mailto:info@signalpublishers.com)



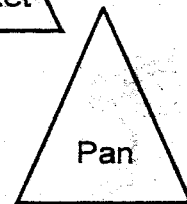
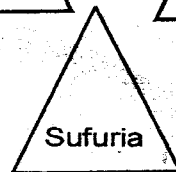
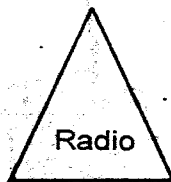
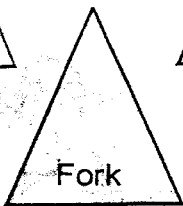
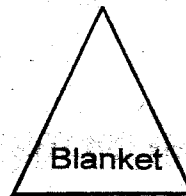

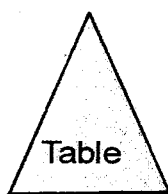
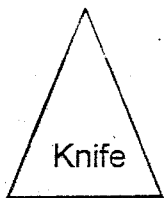
4. Draw two plants that grow in water.

--	--




5. Name the animals found in cracks on walls.



6. Colour the triangles with utensils only.



7. Name and colour the farm tools.



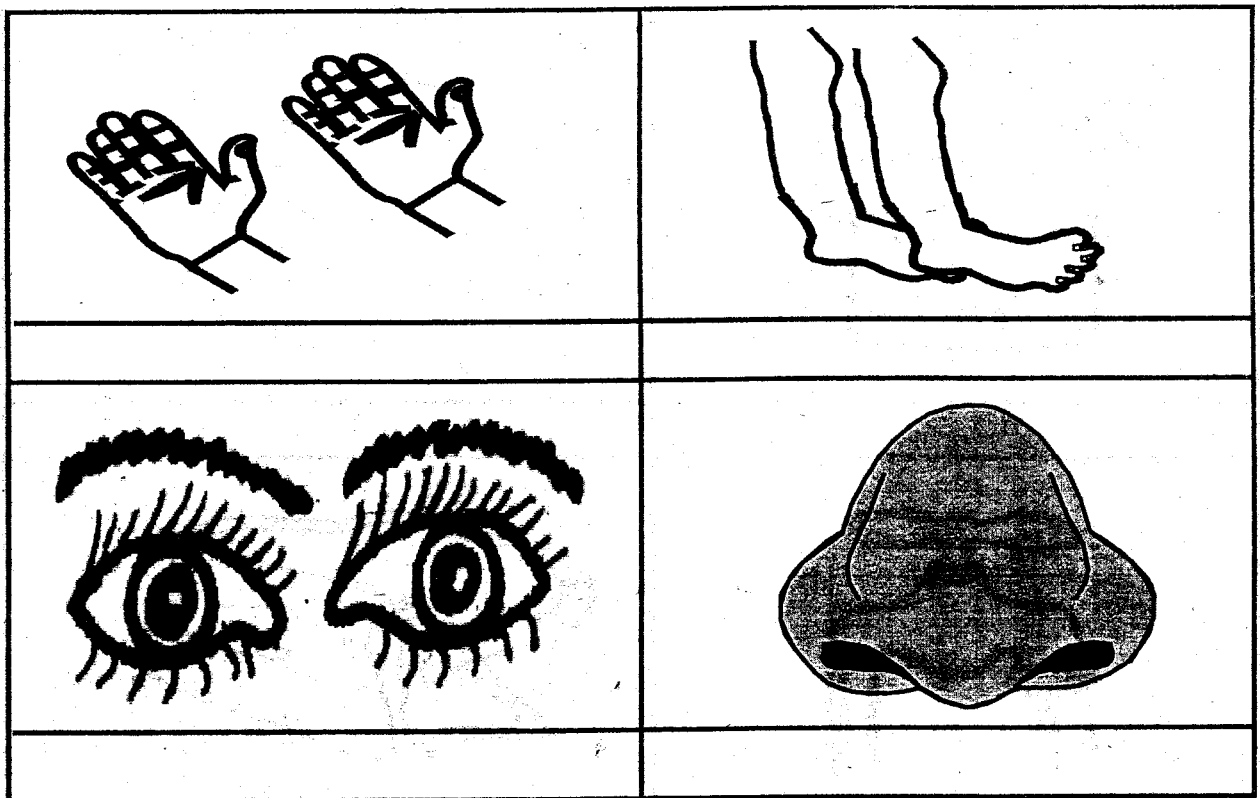
**SIGNAL EXAMS 2018  
LITERACY ACTIVITIES**

<b>NAME:</b>	
<b>SCHOOL:</b>	


**1. Read the story below and circle polite words.**

Goodmorning madam? May I have your textbook? Yes, you may have it. Thank you for your help. Am sorry for coming late. Welcome John.


**2. Name the body parts.**



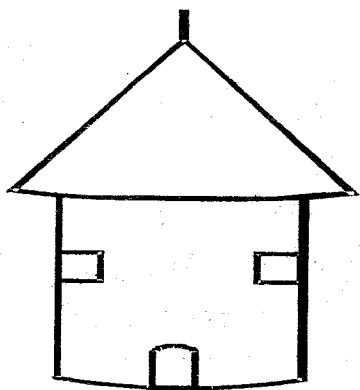
3. Colour the pictures and fill in 'a' and 'u' sounds.



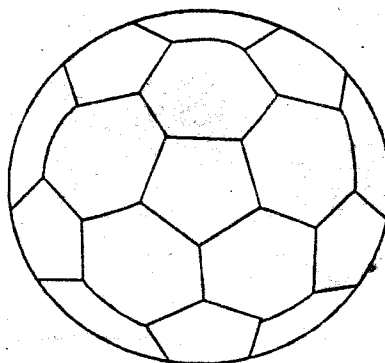
v \_ \_ n



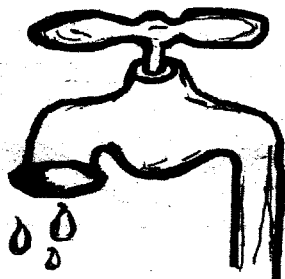
h \_ \_ t



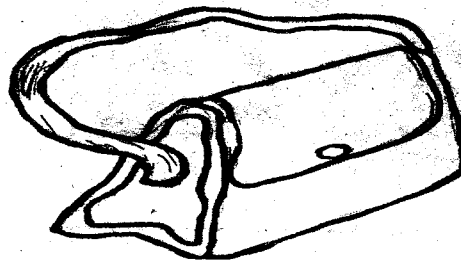
h \_ \_ t



b \_ \_ ll



t \_ \_ p



b \_ \_ g

**SIGNAL EXAMS 2018**  
**HYGIENE AND NUTRITION ACTIVITIES**

<b>NAME:</b>	
<b>SCHOOL:</b>	

**1. Match the health activities.**

Wash hands with

Eat healthy

Drink clean

Play to do

Have enough \_\_\_\_\_ to rest.

water

exercise

sleep

soap

food

**2. Join the dots and read the names.**


tablet

Inhalers

Capsules




© Signal Publishers Limited 2018

Cell: 0722424484/ 0710326410 Mombasa Office: 0712345187  
Website: [www.signalpublishers.com](http://www.signalpublishers.com). Email: [info@signalpublishers.com](mailto:info@signalpublishers.com)

 SignalPublishers

 @SignalPublishers

3. Draw and colour the things we use to exercise with.



4. Tick in the box with the correct answer.

Take medicine according to prescriptions.

Yes

No

Store medicine on the table.

Yes

No

Take medicine without washing hands.

Yes

No

Take medicine with clean water.

Yes

No

Do not share medicine.

Yes

No

5. Draw a clean tooth

