

SIGNAL EXAMS 2018


Early Grade Mathematics


Class 1


Term 1


Mathematics Test

Count and write.

1. 
= _____

2. 
= _____

3. 
= _____

4. 
= _____


Add (+)


5. $14 + 4 =$ _____
 6. $20 + 10 =$ _____
 7. $25 + 5 =$ _____
 8. $16 + 6 =$ _____
 9. $14 + 3 =$ _____
 10. $17 + 2 =$ _____


Subtract (-)

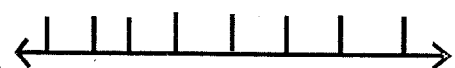
11. $20 - 10 =$ _____
 12. $19 - 12 =$ _____
 13. $13 - 8 =$ _____
 14. $12 - 4 =$ _____
 15. $17 - 4 =$ _____

Fill in the missing number.

16. 
0 1 2 3 4 _____

17. 
0 5 10 15 _____

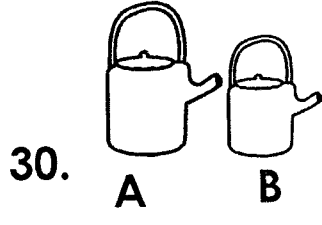
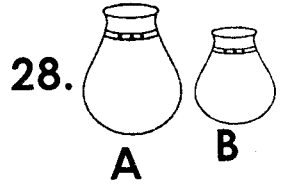
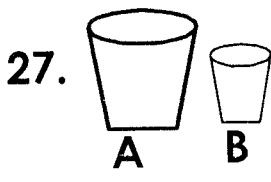
18. 
0 2 4 6 8 _____

19. 
4 8 12 16 _____

Match the days with the numbers.

- | | |
|---------------|---|
| 20. Monday | 3 |
| 21. Tuesday | 5 |
| 22. Wednesday | 1 |
| 23. Thursday | 2 |
| 24. Friday | 7 |
| 25. Saturday | 4 |
| 26. Sunday | 6 |

Which one is bigger?



Circle the bigger number.

31. 10 100

32. 20 30

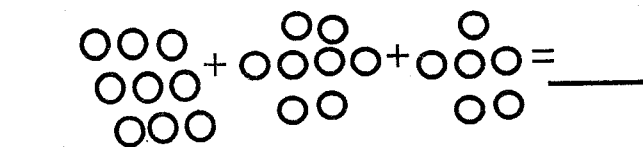
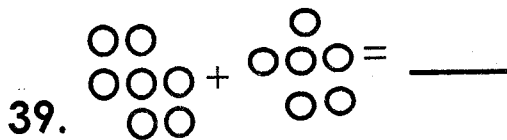
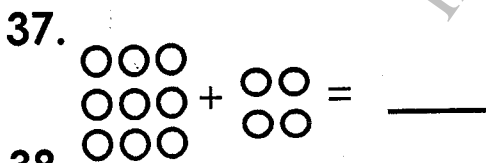
33. 21 19

34. 14 16

35. 15 25

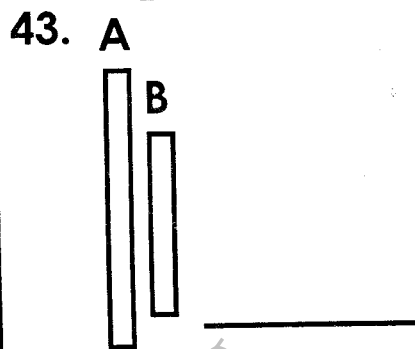
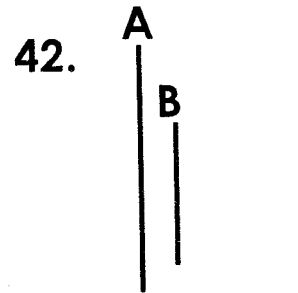
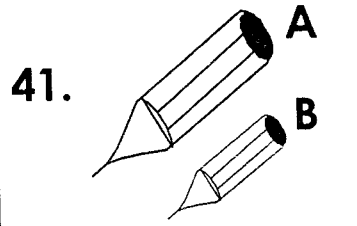
36. 13 23

Count and add.



40. Draw 15 dots.

Which one is longer.





44. Two boys have ____ legs.

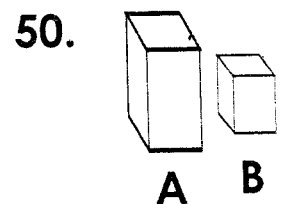
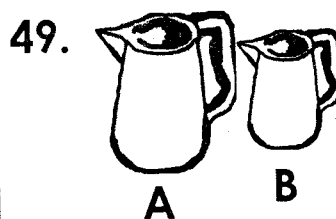
45. Eight cows have ____ ears.

46. Three donkeys have ____ legs.

Who is taller?



Which one holds more water?



SIGNAL EXAMS 2018

Early Literacy Programme

Class 1

Term 1

English Test

Part A : Dictation.

Write the words as the teacher says them.

1. _____
2. _____
3. _____
4. _____
5. _____
6. _____
7. _____
8. _____
9. _____
10. _____

Part B: Circle the words with the following letters.

11. t	mat	play	am
12. a	met	tam	sit
13. e	mat	is	met

14. m	met	is	sit
15. z	at	zebra	sip
16. w	work	home	apple
17. b	book	pit	pat

Part C: Writing words.

Write these words in capital letters.

18. puppy - _____
19. kitten - _____
20. classroom - _____
21. chalk - _____
22. pen - _____
23. teacher - _____
24. baby - _____
25. food - _____





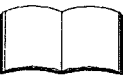

Part D: Writing

Write these words two times.

- 26. sit _ _____
- 27. tam _ _____
- 28. said _ _____
- 29. am _ _____
- 30. at _ _____
- 31. set _ _____
- 32. mat _ _____

Part E: Matching.

Match the picture with the word.

- 33.  fruit
- 34.  ruler
- 35.  tree
- 36.  spoon
- 37.  pencil
- 38.  book

Part F: Writing words.

Write these words well.

- 39. bbay - _____
- 40. pne - _____
- 41. rluer - _____
- 42. bkoo - _____
- 43. rtee - _____
- 44. hsop - _____
- 45. mna - _____
- 46. mnoo - _____

Part G: Comprehension.

Read the story and answer the questions.

Ben has a hen. The hen is big.

The cat can see the hen. The cat runs after the hen. Ben is sad.

- 47. The hen is _____.
- 48. Can the cat see the hen?

- 49. Is ben sad? _____
- 50. The boy is called _____

SIGNAL EXAMS 2018

Early Literacy Programme
Darasa la 1

Muhula wa 1

Jaribio la Kiswahili

Sehemu ya A : Imla.

Andika maneno mwalimu atakayosema.

1. _____
2. _____
3. _____
4. _____
5. _____
6. _____
7. _____
8. _____
9. _____
10. _____

Sehemu ya B. Sarufi.

Andika maneno yafuatayo katika wingi.

11. kaa - _____
12. tikititi - _____
13. neno - _____
14. wazo - _____
15. vazi - _____
16. ini - _____
17. kitabu - _____

Sehemu ya C. Nyakati.

Andika maneno yafuatayo katika wakati uliopo.









Mfano: atalia - analia.

18. atacheza - _____
19. atalala - _____
20. atauza - _____

21. atataka - _____
 22. atalia - _____
 23. atauma - _____

Sehemu ya D. Msamiati.

Linganisha picha na neno.

24.  kijiko
 25.  bilauri
 26.  kikombe
 27.  mpira
 28.  meza
 29.  kiti
 30.  mwezi
 31.  jua

Sehemu ya E. Sarufi.

Andika kwa herufi kubwa.

32. ng'ombe - _____
 33. maziwa - _____
 34. maji - _____

35. suruali - _____
 36. gari - _____
 37. watoto - _____
 38. mchezo - _____

Sehemu ya F: Silabi.

Andika maneno ukitumia silabi hizi.

39. ba - _____
 40. ma - _____
 41. ka - _____
 42. nya - _____
 43. du - _____
 44. da - _____

Sehemu ya G: Sarufi.

Andika maneno haya tena.

45. mwalimu - _____
 46. wanyama- _____
 47. nyani - _____
 48. nyororo - _____
 49. kuteka - _____
 50. mkutano - _____

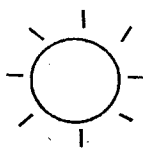
SIGNAL EXAMS 2018
SCIENCE


NAME:	
SCHOOL:	

1. We use _____ to clean our body.

(water, soil, leaves)

Match the weather symbols with their names.

2.  rainy

3.  sunny

4.  windy

5.  calm

6. Hair grows on our _____.
(tongues, heads, eyes)

7. We eat a sugarcane _____.
(leaf, stem, root)

8. We should wash our _____ before eating food.
(head, legs, hands)

9. The _____ of a plant is usually green in colour.
(flower, root, leaf)

10. To keep off germs, we should keep our _____ short.

(hands, fingernails, legs)

11. We clean our teeth using _____.
(toothbrush, soap, towel)

12. When we wash our body, it becomes _____.

(dirty, clean, untidy)

13. We hold things using our _____.
(legs, hands, eyes)

Name any four parts of the leg.

14. _____

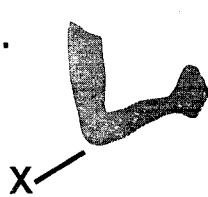
15. _____

16. _____

17. _____

18. We feel a lot of heat when it is _____.

(calm, cloudy, sunny)


19.  The part of the hand marked K is called _____.
(finger, elbow, arms)

Draw the following parts of a plant.

20. roots



21. leaf



22. flower



23. we use soap when _____.
(bathing, eating, sleeping)

24. Roots of plants grow in _____.
(water, air, soil)

25. We cut our fingernails to keep them _____.
(long, short, dirty)

26. The _____ supports the head.
(neck, ear, hair)

Name the external body parts.

27.



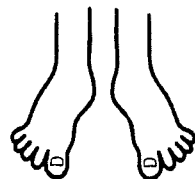
28.



29.



30.



31.



(legs, ear, eyes, hand, nose)

32. Lice are found in _____ hair.
(dirty, clean, tidy)

33. A _____ is used to clean our nose.
(toothpick, towel, handkerchief)

34. _____ is the dirt found in our ears.
(Mucus, Blood, Wax)


35. A dirty mouth smells _____.
(good, nice, bad)

Match the plants with their edible parts.


<u>Plant</u>	<u>Part eaten</u>
36. Sugarcane	roots
37. cabbage	fruits
38. cassava	leaves
39. mango	stem
40. An earbud is used to clean the _____.	(eyes, ears, nose)

Draw the following items.


41. soap




42. basin



43. towel



44. toothbrush



45. handkerchief



46. Our mouth has the tongue and _____ inside. (hair, teeth, ears)

47. The _____ are white in colour. (hair, teeth, hands)

48. Toes are a part of our _____. (hands, legs, head)

49. A clean body is _____. (sick, unhealthy, healthy)

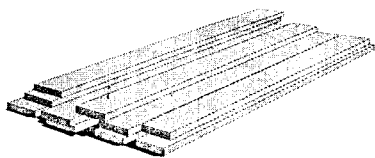
50. We eat oranges _____. (leaves, fruits, flowers)

SIGNAL EXAMS 2018

SOCIAL STUDIES/RELIGIOUS EDUCATION


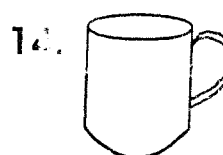


NAME:	
SCHOOL:	

- Houses protect us from _____
(parents, rain, air)
- Huts and manyattas are types of _____
(crops, houses, utensils)
- Mother, father and children are members of one _____
(school, family, hospital)
- Iron sheets are used to build _____ houses.
(permanent, traditional, temporary)
- This building material is called _____



- _____ members live together at home.
(Church, Family, School)
- A hut is built with _____ walls.
(grass, stone, mud)
- A home is a place where people _____
(farm, live, learn)
- People related by blood make one _____
(church, family, market)
- Sharp objects at home can _____ us.
(burn, poison, cut)

Name the things found at home.




16. Rooms are the different parts of a _____
(kitchen, house, school)

Match the parts of the houses and their uses.

- Bedroom cooking food.
- Kitchen sleeping.
- Bathroom sitting and relaxing.
- Sitting room washing our bodies.


21. We use a _____ for cutting fruits and vegetables.
(sufuria, knife, spoon)
22. _____ can harm us.
(Food, Fire, Bed)
23. A manyatta is built with _____.
(timber, cowdug, sand)
24. A _____ ceremony reminds us of the day we were born.
(wedding, religious, birthday)
25. We use this at home for _____.




- (cooking, sleeping, sweeping)
26. We cut long grass around our homes using a _____.
(panga, slasher, knife)
27. My father's brother is my _____.
(aunt, uncle, grandfather)
28. _____ can be poisonous to children.
(Fire, Medicine, Sharp objects)

Draw the following.

29. a broom




30. a manyatta



C.R.E

31. Jesus Christ is a gift to us from _____.
(parents, God, teachers)
32. The wise men _____ God.
(abused, hated, worshipped)
33. We should not accept gifts from _____.
(friends, parents, strangers)
34. The Holy _____ guides us in our daily lives. (water, Bible, spirit)


35. The parts of my body were created by _____.
(Jesus, God, Holy Spirit)
36. We should be _____ to God for creating us.
(sad, thankful, dishonest)
37. God created the _____.

(trees, clouds, stars)
38. I should not _____ with members of my family. (fight, pray, eat)
39. Wisemen presented Jesus Christ with _____.
(clothes, gifts, animals)
40. My name is _____
41. I care for my body by keeping it _____.
(dirty, untidy, clean)
42. Father and mother are members of my _____.
(school, family, hospital)
43. Children have a duty to _____ their parents. (disobey, obey, hate)

Name God's creation.


44.



45.



46.



47.



48. We should thank _____ for giving us families. (God, teacher, mother)
49. I see with my _____
50. Write one memory verse from the Bible _____

SIGNAL EXAMS 2018**Early Literacy Programme****Class 1****Term 1****End Term****English Reading Exam****Read the story aloud to the teacher.**

Ben has fish. Tam has yams. They sit and eat. Tam says, "I like fish." Ben says, "I like fish too." Tam says, "You can eat fish and yams." Ben and Tam eat fish and yams.

KISWAHILI: KUSOMA**Soma kwa sauti.**

Helena alienda hotelini. Alikula kaimati na kunywa kahawa. Helena alishiba sana. Baadaye alielekea nyumbani.