



HIGH FLYER SERIES EVALUATION TEST
STANDARD ONE – YEAR 2017
MATHEMATICS



DATE:

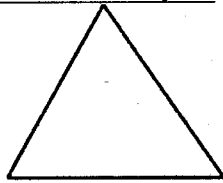
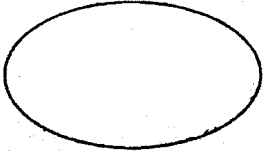
NAME: SCHOOL:


1. $8 = 5 + \underline{\hspace{2cm}}$
2. $3 + 4 + 2 = \underline{\hspace{2cm}}$
3. $5 + \underline{\hspace{2cm}} = 12$
4. $\underline{\hspace{2cm}} + 4 = 13$
5. $67 = \underline{\hspace{1cm}}$ tens $\underline{\hspace{1cm}}$ ones
6. $8 = \underline{\hspace{1cm}}$ tens $\underline{\hspace{1cm}}$ ones
7. $\underline{\hspace{2cm}} - 3 = 5$
8. $9 - \underline{\hspace{2cm}} = 4$
9. Add three to four = $\underline{\hspace{2cm}}$
10. 3 boys have $\underline{\hspace{2cm}}$ legs.

Fill in the missing numbers

11. 9, 10, $\underline{\hspace{1cm}}$, 12, $\underline{\hspace{1cm}}$
12. 26, 25, $\underline{\hspace{1cm}}$, $\underline{\hspace{1cm}}$, 22

Name the shapes

13.  $\underline{\hspace{2cm}}$
14.  $\underline{\hspace{2cm}}$



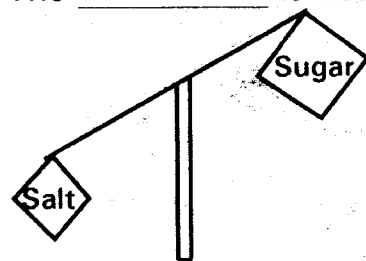
16. 1 week = $\underline{\hspace{2cm}}$ days

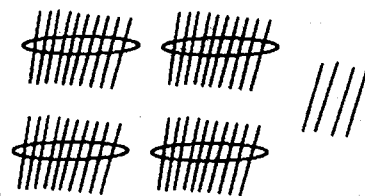
17. A square has $\underline{\hspace{2cm}}$ sides

Arrange from the smallest

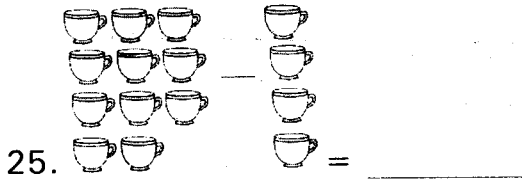

18. 84, 35, 56, 17, 29
 $\underline{\hspace{2cm}}$
19. The second day of the week is
 $\underline{\hspace{2cm}}$
20. What number comes after 29?
 $\underline{\hspace{2cm}}$

21. The $\underline{\hspace{2cm}}$ is heavier.



22. 
 $\underline{\hspace{1cm}}$ tens $\underline{\hspace{1cm}}$ ones

23. One butterfly has 4 wings. 2 butterflies have _____ wings.



26. Which number is between 16 and 18?

27. $60 - 40 =$ _____

28. Which day is before Friday?

29.
$$\begin{array}{r} 49 \\ - 7 \\ \hline \end{array}$$

30.
$$\begin{array}{r} 23 \\ - 3 \\ \hline \end{array}$$

31.
$$\begin{array}{r} 13 \\ - 8 \\ \hline \end{array}$$

32.
$$\begin{array}{r} 31 \\ + 24 \\ \hline \end{array}$$

33.
$$\begin{array}{r} 53 \\ + 22 \\ \hline \end{array}$$

34.
$$\begin{array}{r} 40 \\ + 30 \\ \hline \end{array}$$

35. 2 years have _____ months.

Write in figures

36. Twenty _____

37. Thirteen _____

38. Forty four _____

39. Nineteen _____

40. Thirty five _____

Price list

ITEM	PRICE
Cup	Sh. 25
Spoon	Sh. 10
Banana	Sh. 5
Juice	Sh. 30
Tooth brush	Sh. 15

How much do I pay for:

41. A banana and a spoon? _____


42. A cup and two bananas? _____

43. A toothbrush and 2 spoons? _____

44. A packet of juice and a cup?

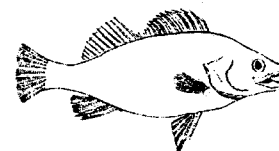
45. Two bananas and a toothbrush?

46. Which one holds less water?



47. Two boys have _____ fingers.

48. Which fish is bigger?



Put correct sign (+, -)

49. $18 \quad \quad \quad 7 = 11$

50. $22 \quad \quad \quad 6 = 28$



HIGH FLYER SERIES EVALUATION TEST
DARASA LA KWANZA – MWAKA 2017
KISWAHILI: LUGHA



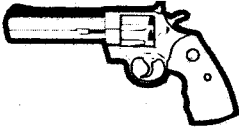

TAREHE:

JINA: SHULE:

Imla

1. _____
2. _____
3. _____
4. _____
5. _____

Andika majina ya michoro

6.  _____
7.  _____
8.  _____
9.  _____



10. _____

Umoja

11. Jino _____

12. _____

13. Nguo _____

14. _____

15. Chura _____

Andika kinyume

16. Chini _____

17. Inama _____

18. Dada _____

19. Lala _____

20. Keti _____

Wingi

matunda

mananasi

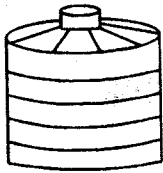
Ambatanisha picha na maelezo



21. Mama amembeba mtoto.



22. Chombo cha kuhifadhia maji



23. Amina anapiga simu.

Jaza mapengo

24. W _____ mbe

25. K _____ j _____ k _____

26. K _____ chwa

27. Mw _____ v _____ l _____

Andika tarakimu zifuatazo kwa maneno

28. 13 _____

29. 8 _____

30. 20 _____

Tumia 'la', 'cha', 'ya', 'wa' na 'vya'

31. Vyakula _____ wageni.

32. Mti _____ maembe.

33. Chumba _____ kulala.

34. Sahani _____ chakula.

35. Shamba _____ mkulima.

Andika vizuri

36. izubm _____

37. oynat _____

38. adnir _____

39. pmiar _____

40. jikiok _____

Kamilisha methali na vitendawili

41. Akili ni _____

42. Fuata nyuki ule _____

43. Askari mlangoni _____

44. Kila niendapo ananifuata _____

45. Hasira _____
(kivuli, kufuli, hasara, mali, asali)

Kamilisha sentensi


46. Kitambaa kinachofunika dirisha huitwa _____

47. Mama wa mama yangu ni _____

48. Kuku hutaga _____

49. Ukisalimiwa shikamoo utajibuje? _____

50. _____ ni mnyama ambaye hubweka.






HIGH FLYER SERIES EVALUATION TEST
STANDARD ONE – YEAR 2017
SCIENCE


DATE:

NAME: SCHOOL:

1. _____ are found on dirty beddings. (House flies, Ticks, Bedbugs)
2. We eat the _____ of carrots. (roots, stems, leaves)
3. On a _____ day, we rest under trees. (rainy, sunny, windy)
4. Fingers, elbow and hand are part of the _____. (leg, arm, head)
5. Plants dry up when it is _____ (rainy, dry, windy)
6. Cow, goats and rabbits feed on _____. (meat, plants, soil)
7. A _____ is not a big animal. (tick, giraffe, rhino)

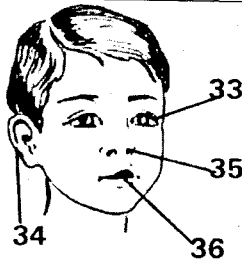
Name the following animals

8.  _____
9.  _____
10.  _____

11.  _____
12. A frog lives in _____ (forest, water, air)
13. Our nails should be _____ and clean. (long, big, short)
14. A butterfly has _____ wings. (2, 4, 6)
15. The sun sets in the _____ (west, north, east)
16. Chicken gives us meat and _____ (feathers, eggs, milk)
17. We _____ drinking water to kill germs. (filter, boil, freeze)
18. A _____ is a source of water. (tap, pot, well)
19. _____ soil feels smooth. (Loam, Sandy, Clay)
20. We get _____ from fish. (eggs, fillet, pork)
21. Spinach and cabbages are _____ (fruits, vegetables, cereals)
22. Germs causes _____ (boiling, diseases, hunger)

23. We need _____ to see things.
(light, mirrors, sound)
24. A kite will fly well when it is _____.
(rainy, cloudy, windy)
25. A train has _____ wheels.
(2, 10, many)
26. We use a _____ for sweeping.
(fork, comb, broom)
27. _____ comes out of our nose when it is cold.
(Tears, Sweat, Mucus)
28. Food gives us _____ to play.
(sleep, energy, appetite)
29. An earthworm lives in the _____.
(soil, clouds, river)
30. A _____ produces sound when plucked.
(bell, drum, guitar)
31. Shaggy hair looks _____.
(smart, untidy, good)
32. The body of a fish is covered with _____.
(hair, scales, feathers)

Name these body parts



33. _____ 34. _____
35. _____ 36. _____



37. The weather is _____.
(cloudy, rainy, windy)

38. A mango fruit has _____ seeds.
(many, two, one)
39. Dogs lives in a _____.
(hives, cowshed, kennel)


Name the foods below



40. _____



41. _____



42. _____



43. _____

44. A _____ is a domestic animal.
(fox, monkey, rabbit)
45. A _____ treat our teeth.
(optician, dentist, pilot)
46. We wear _____ when it is muddy.
(open shoes, gum boots, sandals)
47. Seeds are mostly found in _____.
(leaves, stem, fruits)
48. Grass hoppers move by _____.
(crawling, swimming, hopping)
49. Bees give us honey and _____.
(wax, glue, milk)
50. _____ grows in dry areas.
(Coconut, Mangrove, Cactus)



HIGH FLYER SERIES EVALUATION TEST
STANDARD ONE – YEAR 2017
ENGLISH: LANGUAGE

DATE:

NAME: **SCHOOL:**

Dictation

1. _____
2. _____

3. _____
4. _____
5. _____

Match the pictures with the sentences



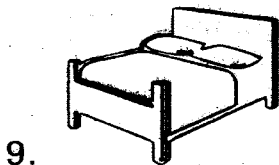
Janet has a nice pet.



My bed is beautiful.



John rode on a horse.



Wafula is digging a pit latrine.

Write the plurals

10. Class _____
11. Toy _____
12. Clock _____
13. Shoe _____

14. Mountain _____

Complete these words

15. Cl _ _ ssr _ _ _ m
16. M _ _ nk _ _ y
17. Dr _ _ w _ _ ng

18. Fr ____ d ____ y

19. N ____ ph ____ w

Write the correct answer

20. A person who makes furniture is called _____

21. A person who builds houses using stones is called _____

22. A _____ preaches to people.

23. A _____ treats our eyes.

24. A _____ repairs shoes.
(optician, cobbler, carpenter, mason, pastor)

Use 'they', 'she' or 'he'

25. _____ is my niece.

26. _____ is my nephew.

27. _____ are our relatives.

Present

28. Dress _____

29. Walk _____

30. Laugh _____

31. Play _____

32. Love _____

Past

Use 'this' or 'these'

33. I have read _____ story many times.

34. Everybody expected _____ pupils to pass.

35. All _____ houses are beautiful.

Complete the sounds made

36. A lamb _____

37. A hyena _____

38. A monkey _____

39. A donkey _____

40. A lion _____

(crows, barks, roars, laughs, bleats, brays, chatters)

Pick the odd one out

41. Nest, kennel, hive, bed, sty.

42. Monday, April, Wednesday, Saturday, Thursday.

43. Vest, spoon, socks, coat, hat.

44. Bus, camel, lorry, van, car.

45. Bananas, oranges, apples, tea, mangoes.

Write well

46. ausqre _____

47. beolw _____

48. abzre _____

49. yks _____

50. sera _____





HIGH FLYER SERIES EVALUATION TEST
STANDARD ONE – YEAR 2017
SOCIAL STUDIES

DATE:

NAME: SCHOOL:

1. Rivers and lakes give us _____
(water, milk, stones)
2. _____ protects us from bad weather and people.
(Shade, Shelter, Clothes)
3. The meat of a pig is called _____.
(beef, pork, mutton)
4. Keeping our homes clean helps us to prevent _____.
(visitors, diseases, friends)
5. Strangers can _____ us.
(protect, love, hurt)
6. My home is near my school, so I go to school _____.
(by bus, on foot, by railway)
7. We wear shoes on our _____.
(feet, hands, fingers)
8. An assistant Chief is the head of a _____.
(Sub-location, family, location)



9. The traffic light marked X is _____.
(red, green, amber)
10. December is the _____ month of the year.
(last, first, middle)
11. Pupils are taught by _____.
(cooks, teachers, prefects)
12. The cooking area is also known as _____.
(bedroom, kitchen, bathroom)
13. When raising the flag, we stand _____.
(at ease, alert, attention)
14.  Many trees growing together make a _____.
(farm, forest, swamp)

15. Street children have no _____
(parents, home, clothes)

16. The walls of a permanent home
are built of _____
(mud, stone, cow dung)

17. We go to school in the

(evening, morning, night)

18. Holidays help us to

(relax, work hard, miss school)

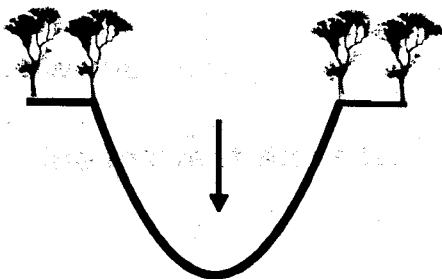
19. Bricks, tiles and sand are
materials used to build a

(bus, house, gate)

20. Burial ceremony is also known
as _____ ceremony.
(funeral, wedding, birthday)

21. The female parent is my

(aunt, mother, sister)



22. Between hills we have

(trees, valleys, lakes)

23. We can jump with our

(hands, legs, arms)

24. Class _____ reminds us
what to do when we are in
class.
(rules, anthem, charts)

25. Moraa helps the teacher to give
out books in class. She is the
class _____
(teacher, prefect, matron)

26. We use _____ flour to
make ugali.
(wheat, rice, maize)

27. Our national flag has _____
colours. (3, 4, 5)

28. People who travel in buses are
called _____
(cyclists, pedestrians,
passengers)

29. The things we see on our way
to school are called _____
(features, compound, pictures)

30. Baskets can be made using

(clay, wool, sisal)



HIGH FLYER SERIES EVALUATION TEST STANDARD ONE – YEAR 2017 CHRISTIAN RELIGIOUS EDUCATION

DATE:

NAME: SCHOOL:

- | | |
|---|--|
| <ol style="list-style-type: none"> 1. God gives us _____ to make plants grow. (soil, rain, cold) 2. Zacheaus was a short man who climbed a _____ to see Jesus. (building, ladder, tree) 3. Jesus fed five thousand people with five loaves and _____ fish. (a few, five, two) 4. Animals were created by _____. (farmers, God, Adam) 5. The Bible teaches us the _____. (wrong, truth, lies) 6. _____ was a priest who worked with Samuel. (Eli, Hosea, Elikanah) 7. Joseph was sold as a slave by his _____. (parents, brothers, friends) 8. An obedient child should be _____. (punished, ignored, awarded) 9. The home town of Jesus was in _____. (Jerusalem, Bethlehem, Nazareth) 10. The first people to see Baby Jesus were the _____. | <p style="text-align: center;">(Kings, angels, shepherds)</p> <ol style="list-style-type: none"> 11. Abraham was very _____ to God. (rich, poor, obedient) 12. Moses helped the Israelites to cross the _____ Sea. (Red, White, Blue) 13. Jesus taught the _____ prayer. (grace, long, Lord) 14. I should not use my hands to _____ others. (greet, beat, help) 15. God speaks to us through the _____. (Bible, story books, stars) 16. Before eating, we should _____. (clap, sing, pray) 17. Mary and Martha were sisters of _____. (John, Joseph, Lazarus) 18. Sharing is a way of showing _____. (greed, love, hate) 19. "Let the _____ come to me". (sinners, children, adults) 20. We have only _____ God. (three, two, one) |
|---|--|



HIGH FLYER SERIES EVALUATION TEST
STANDARD ONE – YEAR 2017
READING

DATE:

NAME: SCHOOL:

Read these words

- | | |
|-------------|------------|
| 1. Colours | 6. Shopper |
| 2. Pictures | 7. Sweater |
| 3. Borrow | 8. Library |
| 4. Twenty | 9. Store |
| 5. Between | 10. Office |

Read these sentences

11. David bought a beautiful scarf.
12. Mandela's daughters are obedient.
13. We were visited by our cousins.
14. There are twelve months in a year.
15. She bought a bicycle and a pair of scissors.

Read the passage

Julius was sent to school in Mombasa. He was a very clever boy. All the teachers liked him. He was very active in class and always ready to help other pupils. He learned to read and write and would teach other pupils.



HIGH FLYER SERIES EVALUATION TEST
DARASA LA KWANZA – MWAKA 2017
KUSOMA

TAREHE:

JINA: SHULE:

Soma maneno haya:-

- | | |
|----------------|--------------|
| 1. Kichwa | 6. Alfajiri |
| 2. Mjomba | 7. Magharibi |
| 3. Machungwa | 8. Kikombe |
| 4. Ubaoni | 9. Barabara |
| 5. Wanapendana | 10. Kipepeo |

Soma sentensi hizi:-

11. Mwaka mmoja una miezi kumi na mawili.
12. Ndugu wa kike wa mama yangu ni shangazi yangu.
13. Safu ya milima inapatikana kule mkoa wa kati.
14. Kuna aina nyingi ya miti ya matunda.
15. Shule yetu hufanya vyema kwenye mitihani yote.

Soma kifungu hiki

Watu huwasiliana kwa njia nyingi. Wengine huandika barua, kupigiana simu na kutuma mjumbe apelike ujumbe. Siku hizi njia za mawasiliano ni nyingi kama vile redio na televisheni.