

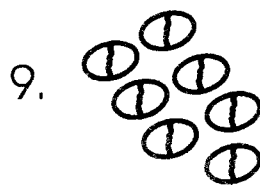
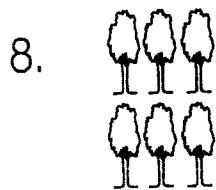
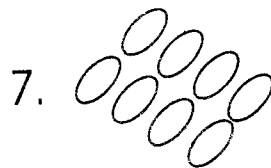
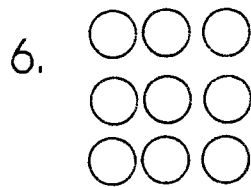
Early Grade Mathematics

Class 1

Fill in the place chart.

	Tens	Ones
1. 18	_____	_____
2. 17	_____	_____
3. 16	_____	_____
4. 14	_____	_____
5. 12	_____	_____

Count and write.



Write in words.

10. 10 _____

11. 11 _____

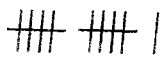
12. 12 _____


13. 9 _____


14. 8 _____


15. 15 _____

Count the tallies.

16.  _____

17.  _____

18.  _____

19.  _____

Add.

20. $11 + 4 =$ _____

21. $16 + 2 =$ _____



22. $9 + 6 =$ _____

23. $4 + 7 =$ _____

24. $6 + 3 =$ _____

25. $10 + 2 =$ _____

Work out.

26.  +  = _____

27. $\begin{matrix} \circ \circ \circ \\ \circ \circ \circ \\ \circ \circ \circ \\ \circ \end{matrix} + \circ \circ = \underline{\quad}$



Draw.

28. 2 curved lines.

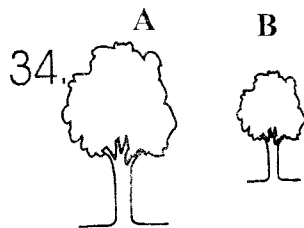
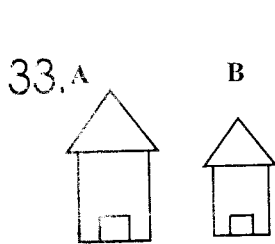
29. 2 straight lines.

30. 12 dots.

Which one is bigger.



Which one is taller?



Circle the lesser number.

35. 8 7

36. 4 3

37. 6 9

38. 10 11

Circle the greater number.

39. 12 11

40. 13 14

41. 16 15


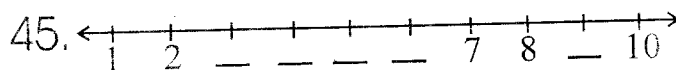
Write the numbers.

42. from 18 to 26

43. from 19 to 27

44. from 14 to 22


Fill in the missing numbers.



48. Kamau had 8 goats, Joyce had 14 goats while Joy has 11 goats. How many goats do they have altogether?
_____ goats

49. A class has 12 boys and 11 girls. How many pupils are in that class? _____ pupils.

Which one is taller?



Tusome Early Literacy Programme

Class 1

Term 3

English Test

Name: _____

School: _____

Class: _____

Part A: Dictation.

Write the words as the teacher says them.

1. _____
2. _____
3. _____
4. _____
5. _____
6. _____
7. _____
8. _____
9. _____
10. _____

Part B:

Fill in the missing letters.

11. b ____ x
12. b ____ y
13. cl ____ ss
14. f ____ th ____ r

15. r ____ d

Part C:

Write the plurals of these words.

16. Paper - _____
17. Book - _____
18. Man - _____
19. Box - _____
20. Elephant - _____

Part D: Making words.

Make words using these letters.


21. c - _____
22. f - _____
23. sc - _____
24. m - _____

25. sh - _____

Part E:

Write the names of these pictures.

26.



27.



28.



29.



30.



(house, socks, bowl, tree, skirt)



SOLUTION TRIAL EXAMS 2017

Standard One

007 NAME SCHOOL DATE.....

SOCIAL STUDIES

1. Father and mother are my _____
(uncle, parents, friend)
2. Every family needs food, clothes and _____
(T.V, car, shelter)
3. Clothes keep us _____
(hot, warm, cold)
4. A Maasai house is called a _____
(hut, house, manyatta)
5. We cut grass with a _____
(knife, jembe, panga)
6. The _____ is the head of the family.
(uncle, mother, father)
7. When we do wrong, we say sorry
(sorry, thank you)
8. _____ house produces fire
(rain, fire, dirt)
9. A bird can _____ (talk, laugh, fly)
10. Many trees make a _____
(shamba, river, forest)
11. The morning _____
(aunt, uncle, grandparent)
12. When we are sick, we go to the _____
(church, school, hospital)
13. People enter their home through the _____
(fence, shamba, gate)

14. _____
(forest, hill, house)
15. A cow gives us meat and _____
(eggs, milk, wool)
16. We keep tools in the _____
(kitchen, store, bedroom)
17. _____ days are happy days.
(Funeral, Wedding)
18. A family is made up of the father, mother and _____
(siblings, children, grandparents)
19. The rain has _____ colours (6 2, 3)
20. The walls of a traditional house are made of _____
(mud, grass, stones)
21. When it is raining, we carry _____
(papers, leaves, an umbrella)
22. _____ food for our teeth.
(Sugar, sweets, Milk)
23. A person who makes clothes is a _____
(carpenter, tailor, cobbler)
24. We wear _____ clothes when it is hot.
(light, heavy, warm)

25. A _____ is found in the bedroom.
(T.V, bed, sofa)

C.R.E

26. I am a child of _____.
(Satan, mum, God)

27. Jesus was born in _____.
(Nazareth, Bethlehem, Judea)

28. God called Samuel _____ times.
(2, 4, 3)

29. Jacob had _____ sons. (10,11,12)

30. God made all things in _____ days.
(6, 8, 7)

31. God created Adam and _____.
(Eve, a pen, a car)

32. _____ killed his brother Abel.
(Peter, Cain, Isaac)

33. Moses was given the _____
commandments. (10,12, 2)

34. Abraham's wife was called _____.
(Hannah, Sarah, Ruth)

35. _____ was sold by his brothers.
(John, Joseph, Isaac)

36. We should _____ our parents
(hate, disobey, obey)

37. We should pray _____.
(once, always, every week)

38. Jesus made the _____ to see.
(deaf, blind, lame)

39. Jesus died because of our _____.
(good, love, sins)

40. Christians worship in a _____.
(mosque, church)

41. _____ was the father of Samuel.
(Abraham, Jacob, Elkanah)

42. We should _____ our enemies.
(beat, love, hate)

43. We must _____ before we eat.
(pray, laugh, play)

44. Baby Jesus was born in a _____.
(basket, manger, hospital)

45. God rested on the _____ day.
(6th, 8th, 7th)

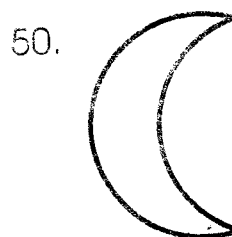
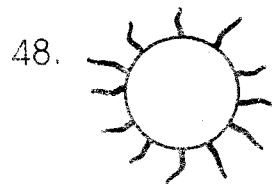
46. Adam and Eve lived in the garden of _____.
(Judas, Eden, Jerusalem)

47. This is a _____




(house, mosque, church)

Name things that God created.



007 NAME SCHOOL DATE.....
SCIENCE

1. Moving air is called _____.
(rain, clouds, wind)
2. We taste things with our _____.
(nose, mouth, tongue)
3. A snake has _____ legs. **(4, 2, 0)**
4. Sick people go to the _____.
(church, hospital, school)
5. We should keep our nails clean and _____.
(long, short, sharp)
6. A _____ is a wild animal.
(cat, sheep, lion)
7. We should _____ fruits before eating.
(cook, cut, wash)
8. This balloon is full of _____.



(water, soil, air)

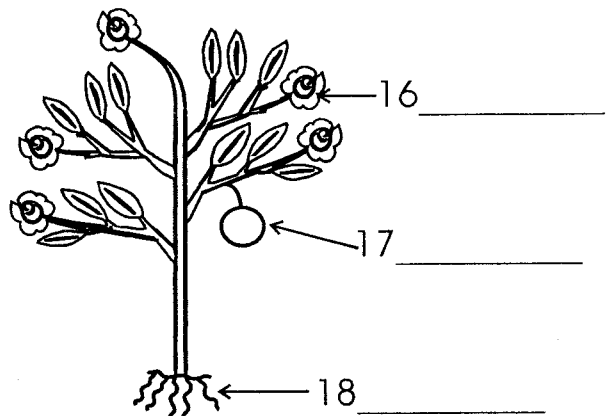
9. We eat the _____ of a carrot.
(fruit, leaf, root)
10. _____ gives us light during the day.
(moon, stars, sun)
11. The weather is _____.



(sunny, rainy, cloudy)

12. A fish lives in _____.
(forest, land, water)
13. The beautiful part of a plant is a _____.
(leaf, stem, flower)
14. A cow gives us meat and _____.
(eggs, milk, wool)
15. The sun rises in the _____.
(West, East, North)

Name the parts of a plant.



19. When it is dry, we _____ our flowers.
(water, uproot, cover)
20. Which one is not a source of water
_____. **(well, ocean, tap)**
21. Mosquitoes spread _____.
(AIDS, Malaria, Cholera)
22. We wear _____ during a rainy day.
(slippers, gumboots, socks)

23. The body of a bird is covered with _____.
(scales, feathers, skin)
24. We use water for _____.
(digging, eating, drinking)
25. A rotten egg smells _____.
(good, sweet, bad)
26. _____ make our teeth strong.
(Sweets, Biscuits, Milk)
27. A mango has _____.
(two seeds, many seeds, one seed)
28. Every home should have a _____.
(toilet, sink, T.V)
29. We wear _____ clothes on a sunny day.
(heavy, light, warm)
30. A bicycle has _____ wheels.
(2, 4, 1)
31. Mangoes, oranges and bananas are _____.
(seeds, fruits, food)
32. We use _____ soil for modelling.
(clay, sand, loam)
33. Dirty feet keep _____.
(lice, jiggers, flies)
34. The Kenyan flag has _____ colours.
(4, 6, 7)
35. We should wash our hands _____ visiting the toilet.
(before, when, after)
36. Snakes and mosquitoes are _____ animals.
(good, bad, smart)
37. These are seeds of a _____ plant.



(maize, bean, rice)

38. Most leaves are _____ in colour.
(yellow, white, green)
39. The colour of blood is _____.
(red, blue, yellow)
40. We clean our bodies to avoid _____.
(diseases, food, sweat)
41. Birds fly with _____.
(hands, legs, wings)
42. We clean our nose with a _____.
(towel, brush, handkerchief)
43. We eat the _____ of a tomato.
(seeds, fruit, roots)
44. Sugarcane tastes _____.
(sour, bitter, sweet)
45. We get water from _____.
(cows, the shamba, rivers)
46. Which one does not produce light?
_____. (Sun, Torch, Stone)
47. My hair is _____ in colour.
(red, yellow, black)
48. Germs make us _____.
(happy, sick, sleep)
49. We cannot touch _____.
(soil, air, water)
50. A _____ has a long neck.
(lion, cat, giraffe)

Reading

Read this story loudly.

Last Sunday Tam and Tom went to graze their cows. They left the cows grazing and went down to the river to swim. When they came back, they could not see their cows.

KUSOMA.**Soma hadithi hii kwa sauti.**

Katana ni mvulana. Ana miaka minane. Babake anaitwa Ali, naye mamake anaitwa Shiro. Katana ni mwanafunzi wa darasa la kwanza. Anapenda kucheza kandanda.



Tusome Early Literacy Programme

Darasa la 1

Muhula wa 3

Jaribio la Kiswahili

Jina: _____

Shule: _____

Darasa: _____

Sehemu ya A: Imla
Andika maneno mwalimu atakayoyasema.

1. _____
2. _____
3. _____
4. _____
5. _____
6. _____
7. _____
8. _____
9. _____
10. _____

Sehemu ya B: Silabi
Tunga maneno ukitumia silabi hizi.

11. ka - _____
12. ba - _____
13. nya - _____
14. du - _____
15. sa - _____

Sehemu ya C:

Andika wingi wa maneno haya.

16. Kiti - _____
17. Meza - _____
18. Kitanda - _____
19. Mwalimu - _____
20. Kitabu - _____

Sehemu ya D:


Andika sentensi hizi kwa herufi kubwa.

21. baba anacheka _____
22. mtoto anakula _____
23. mwizi analia _____
24. mkate umeoza _____
25. kiti kimevunjika _____

Sehemu ya E:

Andika majina ya picha hizi.

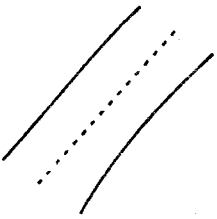
26.



27.



28.



29.



30.



(bakuli, mto, barabara, nyumba, mtoto)