

TARGETER WINGS EVALUATION TEST

STANDARD ONE - YEAR 2017

MATHEMATICS



007

NAME SCHOOL

Date:

Count and write how many.

1. + =

2. $5 + \square = 9$

3. $7 + 3 + 2 = \underline{\hspace{2cm}}$

4. Nine girls have $\underline{\hspace{2cm}}$ ears.

5.
$$\begin{array}{r} 64 \\ +13 \\ \hline \end{array}$$

6.
$$\begin{array}{r} 15 \\ +2 \\ \hline \end{array}$$

Write the missing numbers.

7. 49, 50, 51 $\underline{\hspace{1cm}}$, $\underline{\hspace{1cm}}$

8. 10, 20, 30, $\underline{\hspace{1cm}}$, $\underline{\hspace{1cm}}$

9. 25, 20, 15 $\underline{\hspace{1cm}}$, $\underline{\hspace{1cm}}$

10. Two weeks have $\underline{\hspace{2cm}}$ days.

11. Two plus twenty seven = $\underline{\hspace{2cm}}$

12. $90 - 20 = \underline{\hspace{2cm}}$

13.
$$\begin{array}{r} 24 \\ -12 \\ \hline \end{array}$$

14.
$$\begin{array}{r} 7 \\ -2 \\ \hline \end{array}$$

15.
$$\begin{array}{r} 57 \\ -4 \\ \hline \end{array}$$

Write in words.

16. 27 $\underline{\hspace{3cm}}$

17. 18 $\underline{\hspace{3cm}}$

18. 40 $\underline{\hspace{3cm}}$

Circle the correct number.

19. Five = 6, 15, 5, 3

20. Sixteen = 18, 24, 16, 6

21. Mary had 15 eggs. She gave to John. How many were left? $\underline{\hspace{2cm}}$

22.
$$\begin{array}{r} 76 \\ -23 \\ \hline \end{array}$$

24. $80 - 20 = \underline{\hspace{2cm}}$

Write from the smallest to the largest.

24. 15, 27, 8, 5, 59 = $\underline{\hspace{3cm}}$

25. 50, 20, 40, 10 = $\underline{\hspace{3cm}}$

26. $10 - 0 = \underline{\hspace{2cm}}$

27. $18 + 1 = \underline{\hspace{2cm}}$

28.
$$\begin{array}{r} 24 \\ + \square \\ \hline 27 \end{array}$$

29. 64

tens	ones

30. 100

hundred	tens	ones

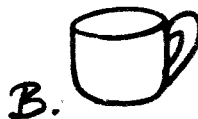

31.
$$\begin{array}{r} 76 \\ -13 \\ \hline \end{array}$$

32. This line is _____

(oval, curved, straight)


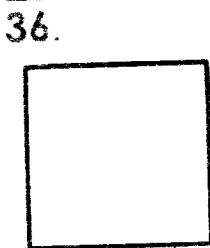
33. What is sixty three in figures _____

34. Which will hold more? _____

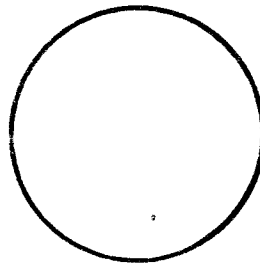


35. $23 + 2 =$ _____

Name the shapes.



38.

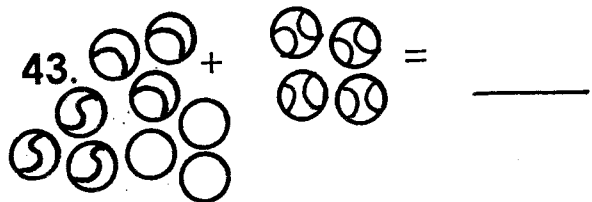


39. $9 - 9 =$ _____

40. Three dogs have _____ tails.

41. $\square + 20 = 40$

42. 8 tens + 4 ones = _____



Write in symbols.

44. One hundred and one _____

45. Sixty nine _____

46. thirty _____

47. eleven _____

48. $16 + 16 =$ _____

49. $\square - 4 = 10$

50. $24 - \square = 18$

TARGETER WINGS EVALUATION TEST

STANDARD ONE - YEAR 2017

ENGLISH

007



Date:

NAME SCHOOL

Part A: Dictation

Write the words as the teacher says them.

1. _____
2. _____
3. _____
4. _____
5. _____

Part B: Capital letters.

Write the following words in capital letters.

6. pain _____
7. under _____
8. nail _____
9. sheep _____
10. team _____

Part C: Drawing.

Draw the following.

11. fish

12. tree

--	--

13. Church

14. bird

--	--

15. book

--

Part D: Circling words.

Circle the word with the following sounds.

16. p - cook, sit, play
17. s - cut, plate, sit
18. b - basin, chair, cat
19. g - come, sleep, good
20. h - cry, hen, dance

Part E: Comprehension.

Read the passage and answer the questions below.

Tom and Jerry have a hen. They go out to play with the hen. After some times they rest under a shade. It is time to go home says Tom. They start looking for the hen. On their way home they see the hen. They all laugh.

21. What do Tom and Jerry have?

22. What do they do with the hen?

23. Where do they rest?

24. Where do they get the hen?

25. Are they happy to see the hen?

TARGETER WINGS EVALUATION TEST

STANDARD ONE - YEAR 2017

SOCIAL STUDIES/ C.R.E

007



Date:

NAME SCHOOL

1. A homestead is where _____ live.
(animals, people, wind)
2. The mother of my mother is my _____.
(grandfather, grandmother, aunt)
3. We are sad during a _____.
(wedding, funeral)
4. _____ is a basic need.
(Car, Shelter, Television)
5. A pig gives us _____.
(beef, pork, mutton)
6. _____ is in charge of our school.
(Headteacher, Father, Teacher)
7. _____ is used for digging.
(Knife, Jembe, Panga)
8. We raise our national flag on _____.
(Friday, wednesday, sunday)
9. _____ brings rain.
(Clouds, Sun)
10. We wash our bodies with water and _____.
(soap, pegs, leaves)
11. The roof of a thatched hut is made of _____.
(stones, glass, grass)

Name the features


12. _____ 13. _____



14. _____



(forest, hill, river)

15. Food is cooked in the _____.
(toilet, bathroom, kitchen)
16. Nuclear family is made up of children and _____.
(parents, aunt, uncles)
17. We are taught to read and write in _____.
(our homes, church, school)
18. The weather is _____.

19. The hut is _____ in shape.
(round, flat, rectangular)
20. A _____ travels on foot.
(cyclist, driver, pedestrian)

21. The other name for kitchen is _____
(cooking area, bedroom, sitting room)
22. A _____ helps to carry goods.
(Lion, Donkey, Zebra)
23. Every home must have a _____
(toilet, television, car)
24. Bricks make the _____ of a house.
(roof, wall)
25. A _____ is used to fix or remove nails from timber.
(screws, jembe, hammer)
26. Diwali is celebrated by _____ at the end of the year.
(Muslims, Christians, Hindus)
27. A _____ is a person that you do not know.
(friend, police, stranger)
28. Grains can be kept in the _____
(bedroom, office, granary)
29. A _____ treat sick people.
(Doctor, Teacher, Prefect)
30. A _____ makes clothes.
(teacher, tailor, farmer)

C.R.E

31. Children should _____ their parent.
(obey, hate, abuse)
32. God rested on the _____ day.
(1st, 6th, 7th)
33. _____ was the first woman to be created.
(Adam, Eve, Sarah)
34. Before we eat we should _____
(pray, abuse, play)
35. The father of Isaac was _____
(Abraham, Jacob, Moses)


36. Baby Jesus was born and put in a _____
(bed, manger, chair)
37. Jesus mother was called _____
38. _____ was the priest when Samuel was called by God.
(Moses, Elikanah, Eli)
39. We should pray _____
(in the evening, in the morning, always)
40. Joseph was sold by his brother to _____
(Canaan, Israel, Egypt)
41. I should _____ my teacher.
(hate, love, abuse)
42. _____ taught the disciples the Lord's prayer.
(satan, Jesus, God)
43. Jesus was visited by _____ wisemen.
(4, 3, 2)
44. King _____ wanted to kill baby Jesus.
(Herod, David, Man)
45. Esau and Jacob were _____
(brothers, enemies, sisters)
46. "Our _____ who is in heaven"
(father, hell, aunt)
47. Jesus raised _____ from dead.
(Saul, Lazarus, Peter)
48. Praying is talking to _____
(God, parent, satan)

Name the things God created.

49.



50.



TARGETER WINGS EVALUATION TEST

STANDARD ONE - YEAR 2017

007

SCIENCE




Date:

NAME SCHOOL

1. We _____ water for drinking.
(filter, boil, clean)


2. We eat the _____ of a
sugarcane.



(stem, root, leaf)

3. Milk is _____ in colour.
(yellow, white, red)

4. The weather is _____




(windy, rainy, sunny)

5. Mosquito spread _____.
(AIDs, typhoid, malaria)

6. Dirty toes keep _____
(rice, lice, jiggers)

7. The animal below lives in _____

(water, forest, holes)




8. The shadow is longest _____
(in the morning, at noon)

9. The wheel of a bicycle are
_____ in shape.
(round, square, oval)

10. _____ support the plant in the
soil.

(Fruit, Root, Leaf)

11. This is a _____



(mango, carrot, leaf)

12. We should keep our bodies

(clean, wet, cold)

13. A dead animal smells _____
(nice, bad, good)

14. Moving air is called _____
(shadow, wind, rain)

15. We beat _____ to produce
sound.

(radio, sky, drum)

16. People get thirsty on a _____
day.

(cloudy, rainy, sunny)

17. We should not play with _____
(pets, snakes, cat)

18. Personal items should not be

(used, stored, shared)

19. Germs causes _____
(food, diseases)

20. Dry soil gives _____
(water, mud, dust)

21. The skin of a fish is covered
with _____

(fur, scales, feather)

22. Tidy hair looks _____
(dull, smart, poor)


23. We use _____ to make our
food taste well.

(sugar, milk, onion)

24. A _____ sinks in water.
(leaves, paper, stone)

25. _____ grows crops.
(Farmer, Teacher, Nurse)

26. The mouth of a bird shown is called _____



(wing, beak, mouth)

27. The sun is a source of _____

(sound, heat, water)

28. Strong wind can blow off a _____

(roof, river, stone)

Name the parts of the body.



29. _____ 30. _____

31. _____ 32. _____

33. _____ 34. _____

35. A cat produces a sound called _____

(barking, meowing, crying)

36. Water is stored in a _____

(tank, lake, river)

37. Socks should not be _____

(cleaned, shared, washed)

38. Seeds need water, air and _____ to germinate.

(food, mature, warmth)

39. When we are sick we go to _____

(hospital, swim, school)

Draw the following.

40. web 41. bell

42. axe

43. Most plants are _____ in colour.

(black, red, green)

44. In maize and beans we eat the _____

(roots, seeds, stem)

45. Ears are for _____

(seeing, hearing, smelling)

46. An elephant has very large _____

(years, eyes, ears)

47. Dogs give us _____

(water, security, rest)


48. We chew food with the _____

(ears, teeth, mouth)

49. A young one of a cow is called a _____

(calf, kitten, piglet)

50. This is _____



(knife, mob, bloom)

TARGETER WINGS JARIBIO LA MTHANI



DARASA LA KWANZA - MWAKA 2017

007

KISWAHILI

Tarehe:

JINA SHULE

Sehemu ya A. (Imla)

Andika maneno

nitakayoyasema

1. _____

2. _____

3. _____

4. _____

5. _____

Sehemu ya B:wakati.

Andika maneno haya kwa

wakati uliopo.

6. alimpenda _____

7. alisoma _____

8. alicheza _____

9. alilala _____



10. aliruka _____

Sehemu ya C: Kuchora

Chora picha hizi



11. rinda

12. kiatu




13. gari

14. nyumba



15. duara



Sehemu ya D: Herufi ndogo.

Andika maneno haya kwa

herufi ndogo.

16. KICHANA _____

17. SOKSI _____

18. MSWAKI _____

19. TAULO _____

20. KIATU _____

Sehemu ya E: Ufahamu

Soma ufahamu kisha ujibu maswali.

Mimi ni msichana. Nina umri wa miaka saba. Niko darasa la pili. Ninasomea shule ya msingi ya pembeni. Ninalipenda somo la dini kwa sababu hunifunza mambo ya Mungu. Ninampenda mwalimu wangu Bi. Sarah sana.

21. Huyu mtoto ni

(mvulana, msichana)

22. Mwanafunzi huyu yuko darasa lipi?

23. Shule yake inaitwaje?

24. Analipenda somo lipi?

25. Mwalimu wake anaitwaje?

TARGETER WINGS EVALUATION TEST

STANDARD ONE - YEAR 2017

007



READING

Date:

NAME SCHOOL

Read the story aloud to the teacher.

Akinyi and Mureithi felt pain in their stomachs. Their stomachs became big and hard. They drank water but this made the stomachs bigger and more painful. They decided to lie down for some time. After a short time they were all a sleep when they woke up they were okay.

TARGETER WINGS JARIBIO LA MTIHANI



DARASA LA KWANZA - MWAKA 2017

KUSOMA

007

Tarehe:

JINA SHULE

Soma kwa sauti.

Wiki iliyopita Neema na ndugu zake walienda kumtembelea shangazi yao kijijini. Shangazi yao ni mkulima. Yeye hufuga wanyama mbalimbali kwenye shamba lake. Waliwaona ng'ombe, paka, mbuzi, kondoo na punda. Waliwaona pia kuku, bata, bata mzinga na njiwa. Neema na ndugu zake walifurahi sana kuwaona wanyama na ndege hawa wote wanaofugwa nyumbani.