

SIGNAL EXAMS 2017

Early Grade Mathematics

Class 1

Opener Term 2

Upto week 11 activities


Mathematics Test

Count and write the numbers.


1.



2.



3.



Write three days of the week.

4. _____

5. _____

6. _____

Write the next numbers.

7. 2, 3, 4, _____, _____, _____

8. 10, 11, 12, _____, _____, _____

9. 6, 7, 8, _____, _____, _____

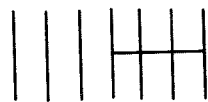
Subtract

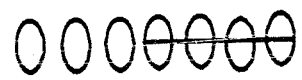
10. $5 - 3 =$ _____

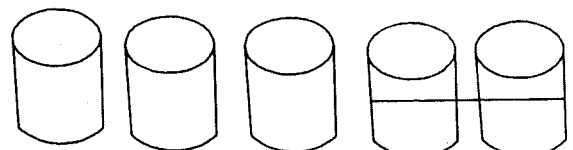
11. $7 - 4 =$ _____

12. $6 - 4 =$ _____

Write the number that is left.

13.  = _____

14.  = _____

15.  = _____

Write the numbers back to

16. I. 6, 5, 4, _____, _____, _____

17. 8, 7, 6, _____, _____, _____, _____

18. 5, 4, 3, _____, _____

Circle the longer

19. _____ A

_____ B

20. _____ A

_____ B

Write + or = signs.

21. 13 _____ $10 + 3$

22. 11 _____ $8 = 18$

23. $9 + 12$ _____ 21

24. 10 _____ $9 + 1$

Write the missing number.

25. $16 =$ _____ $+ 10$

26. $17 =$ _____ $+ 8$

27. $30 =$ _____ $+ 6$

28. $14 =$ _____ $+ 4$

29. $16 =$ _____ $+ 8$

30. $15 =$ _____ $+ 7$

Draw

31. Draw two circles.

32. Draw four rectangles.

33. Draw three triangles.

Fill in the charts.

	<u>Tens</u>	<u>Ones</u>
34. 13	_____	_____
35. 16	_____	_____
36. 18	_____	_____
37. 12	_____	_____
38. 20	_____	_____
39. 21	_____	_____
40. 19	_____	_____
41. 11	_____	_____

Circle the number that is more.

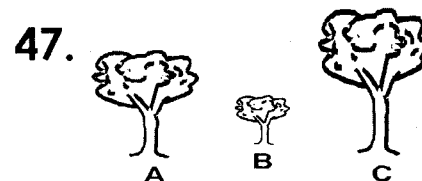
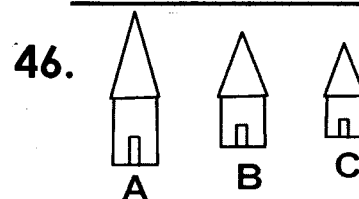
42. 16 13 17

43. 17 14 10

44. 24 14 17

45. 16 11 13

Circle the tallest



Subtract

48. $19 - 4 =$ _____

49. $12 - 6 =$ _____

50. The classroom door is in shape.

(circle, triangle, rectangle)



SIGNAL EXAMS 2017

Early Literacy Programme

Class 1

Term 2

Opener Term 2

English Test

Part A : Dictation.

Write the words as the teacher says them.

1. _____
2. _____
3. _____
4. _____
5. _____
6. _____
7. _____
8. _____
9. _____
10. _____

Part B: Writing words

correctly.

11. gtoat - _____
12. agb - _____
13. rgil - _____
14. byo - _____
15. pte - _____

Part C: making words.

Make words using these letters.

16. b - _____
17. t - _____
18. sh - _____
19. f - _____
20. c - _____
21. sc - _____

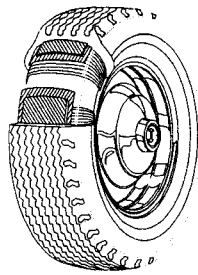
Part D: Matching sentences to pictures.

Match the sentence with the correct picture.


22. This is a wheel.




23. The baby is crying.



24. The girls are playing.



25. The teacher is in class.



Part E: Comprehension

Read the passage and answer the questions below.

John and the ball.

John has a new ball. The ball is green in colour. His father bought the ball from the big shop. John plays the new ball with his friend Paul. He likes his new ball very much.

26. Who has a new ball? _____.

27. Who bought the new ball?
_____.

28. Is John's ball new or old?
_____.

29. Who is John's friend?
_____.

30. Which colour is the new ball?
_____.

Early Literacy Programme

Darasa la 1

Muhula wa 2

Mwanzo wa Muhula

Jaribio la Kiswahili

Sehemu ya A : Imla.

Andika maneno mwalimu

atakayosema.

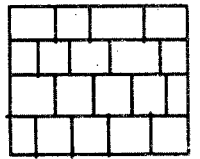
1. _____
2. _____
3. _____
4. _____
5. _____
6. _____
7. _____
8. _____
9. _____
10. _____

Sehemu ya B. Andika majina
ya picha hizi.

11.



12.



13.



14.



15.



16.



(bakuli, ua, kijiko, ukuta,
mguu, kalamu)

Sehemu ya C. Andika majina

haya kwa herufi kubwa.

17. kaka - _____
18. nyanya - _____
19. ng'ombe - _____
20. vita - _____
21. zizi - _____

Sehemu ya D. Jaza pengo.

Jaza pengo kwa herufi ifaayo.

22. t__t__
23. b__s__
24. mt _____
25. mz__z__
26. k__t__b__

Sehemu ya E. Soma ufahamu


kisha ujibu maswali.

Mbwa alimuona kunguru siku ya Jumanne. Kunguru alikuwa amebeba mfupa uliokuwa na nyama. Kunguru alitua mtini. Mbwa alimdanganya kunguru kwa sababu aliutaka mfupa ule. Mbwa aliuchukua ule mfupa ulipoanguka na kukimbia nyumbani.





27. Mbwa alimuona kunguru siku gani? _____
28. Kunguru alikuwa amebeba nini? _____.
29. Kunguru alitua wapi? _____.
30. Mbwa alikimbilia wapi? _____.

**SIGNAL EXAMS 2017
SCIENCE**




NAME:	
SCHOOL:	

- A cow uses its _____ to walk.
(tail, legs, horns)
- Animals that have a small body size are called _____ animals. **(big, huge, small)**
- A _____ has no legs.
(goat, millipede, snake)
-  This is a _____ weather.
(cloudy, sunny, windy)
- The horns of a cow are found on its _____.
(legs, head, tail)
- When there are clouds on the sky, we say the weather is _____.
(sunny, calm, cloudy)
- A cat has _____ legs.
(2, 4, 6)
- The _____ supports our head.
(eyes, neck, nose)
- The feet are a part of our _____.
(arms, legs, head)
- A cactus plant grows in areas that are _____.
(dry, wet, dump)
- _____ grows on our head.
(Hair, Teeth, Toes)


Draw these parts of the body.

- | | |
|---|---|
| 12. An ear
 | 13. An eye
 |
| 14. A nose
 | 15. Thumb
 |
| 16. We use a clean handkerchief to clean our _____.
(teeth, hair, nose) | |
| 17. Our mouth has _____ inside.
(teeth, eyes, hair) | |

Draw the following animals.

- | | |
|---|---|
| 18. A cat
 | 19. A rabbit
 |
| 20. A hen
 | |

21. Drops of water fall from the sky when it is _____.
(windy, rainy, cloudy)

22.  This part of a body is called _____.

(hand, leg, head)

23. The elbow is a part of _____.
(leg, hand, mouth)

24. We cut our _____ to keep them short.

(legs, fingernails, feet)

25. The _____ has two nostrils.
(eye, nose, mouth)

26. We get water from a _____.
(drum, well, tap)

Draw these parts of a plant.

27. A fruit

28. A leaf

29. A seed

30. A flower

31. An elephant is a _____ animal.
(tiny, small, big)

32. We stay under a shade when it is _____.
(cloudy, calm, sunny)


33.  The weather is _____.
(cloudy, calm, rainy)

34. We _____ crops when it is dry.
(weed, plant, irrigate)


35. The orange _____ are edible.
(leaves, fruits, stems)

36. A cow has two _____ on its head. (legs, tails, horns)

37. _____ lives in our home.
(A dog, An elephant, A lion)

38.  This is a _____.
(finger, toe, knee)

39. Mucus come out of our _____.
(nose, eyes, mouth)

40.  This is a _____ plant.
(maize, banana, bean)


41. A dirty mouth smells _____.
(good, nice, bad)

42. We work using our _____.
(teeth, hands, head)

43. We eat a sugarcane _____.
(leaf, root, stem)


44. Plants stand straight when it is _____.
(wind, calm, rainy)

45. Ticks and fleas are _____ animals.
(big, large, small)

46.  This is my _____.
(hand, leg, head)

47. We use water and soap when _____.
(bathing, eating, sleeping)

48. When we are thirsty we drink _____.
(tea, water, milk)

49.  The part shown by an arrow is _____.
(elbow, knee, foot)

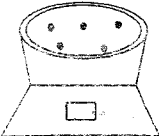
50. Maintaining body cleanliness is called _____.
(dirt, hygiene, health)

SIGNAL EXAMS 2017

SOCIAL STUDIES/RELIGIOUS EDUCATION

NAME:	
SCHOOL:	

- A _____ is a group of people related by blood.
(school, church, family)
- The sister to my father is my _____.
(grandmother, aunt, niece)
- Christmas is a _____ celebration.
(harvest, drama, religious)
- Children are taken to school by their _____.
(friends, parents, enemies)
- During my birthday, I celebrate the day I was _____.
(baptized, born, circumcised)

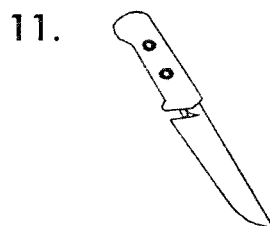
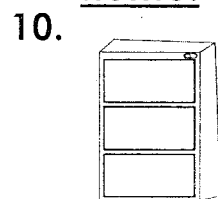
- 

This is found in the _____.

(bedroom, kitchen, bathroom)
- A clean home is _____ to live in.
(safe, unhealthy, dangerous)

- _____ at home should be stored in locked cupboards.
(Fire, Medicine, Insects)
- We use _____ to cut big logs of wood.
(a rake, a broom, an axe)

Name these things found in the home.




- 

12. _____

(broom, panga, cupboard, slasher)
- 

13. _____


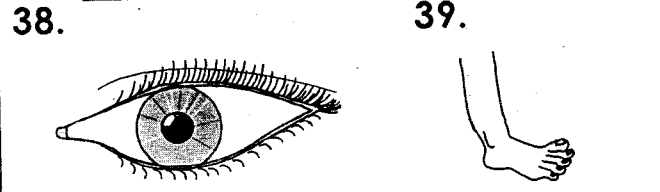
(broom, panga, cupboard, slasher)
- Bedsheets and blankets are found in the _____.
(kitchen, bedroom, store)
- Grass is used to roof _____ houses.
(permanent, modern, traditional)
- The parents to my father are my _____.
(grandparents, uncles, aunts)
- At home, people prepare meals in the _____ area.
(sleeping, cooking, resting)
- A _____ is not a part of a house.
(bedroom, sitting room, school)
- Members of one family should _____ one another.
(hate, fight, help)
- A _____ is used to cut long grass around the home compound.
(jembe, slasher, rake)
- A home is a place where people _____.
(learn, live, farm)

22. Huts and manyattas are types of _____.
(trees, houses, homes)
23. At home, rakes, pangas and jembes are kept in the _____.
(bathroom, sitting room, store)
24. A hut is _____ in shape.
(rectangular, triangular, round)
25. Children can be burnt if they play near _____.
(medicine, knives, fire)
26.  We use a _____ to collect rubbish around the compound.
27. During wedding celebrations, people are _____.
(sad, annoyed, happy)
28. Family members are happy when they live in _____.
(fight, conflicts, peace)
29. Draw any two types of houses 30.

C.R.E

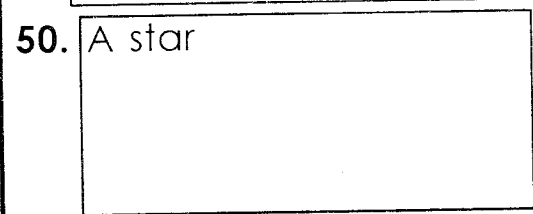

31. Jesus taught His _____ the Lord's prayer.
(father, mother, disciples)
32. We should be _____ for God's gifts to us.
(jealous, sad, thankful)
33. The Holy bible _____ us in our daily lives.
(annoys, guides, misleads)
34. The _____ men worshipped God.
(paralysed, blind, wise)
35. Father, mother, brothers and sisters are members of one _____.
(family, school, hospital)
36. God wants us to _____ Him.
(disobey, hate, worship)

37. The mother of Jesus was from the town of _____.
(Bethlehem, Nazareth, Bethany)
- Name the parts of the body.



(ear, eye, leg, nose, hand)

42. The shepherds were told by _____ that Jesus had been born.
(the wisemen, an angel, Joseph)
43. _____ has given us the gift of life.
(Mother, Teacher, God)
44. During christmas, we celebrate the birth of _____.
(Jesus, Moses, Joseph)
45. We should _____ gifts with others.
(share, hide, poison)
46. Tabitha lived in the town of _____.
(Bethany, Galilee, Joppa)
47. The wisemen were led by a _____ to where Jesus had been born.
(moon, cloud, star)
48. _____ is our provider.
(Neighbour, God, Friend)
- Draw these God's creation.



SIGNAL EXAMS 2017

Early Literacy Programme

Class 1

Term 2

Opener Term 2

Reading Test

Read this passage loudly.

John

My name is John am a boy.

I have a dog and a cat. I use my

ears to hear. I use my teeth to eat.

The food goes to my stomach.

I use my nose to smell. I use my

legs to play football I run with my

dog and cat. My two hands have

ten fingers.

SIGNAL EXAMS 2017

Early Literacy Programme

Darasa 1

Muhula wa 2

Mwanzo wa muhula

Jaribio la Kusoma

Soma kifungu hiki kwa sauti.

Kaka na nyani mkubwa.

Kaka amekaa kitini akila chakula,

mlango wa nyumba haujafungwa.

Nyani mkubwa anaingia na kuiba

chakula chake. Kaka analia kwa

sauti, mama anampa chakula

kingine.