



NAME SCHOOL DATE

MATHS

Write in words.

1. 8 _____

2. 5 _____

3. 9 _____

Add

$$\begin{array}{r} 4. \quad 6 \\ + 3 \\ \hline \end{array}$$

5. One boy has _____ fingers.

Count and write.

6.  = _____

7.  = _____

8.  = _____

9. $6 - 3 =$ _____

$$\begin{array}{r} 10. \quad 10 \\ + 20 \\ \hline \end{array}$$

11. A cow has _____ legs.

Fill in the missing numbers.

12. 5, 6, _____, _____, 9, 10

13. 15, 16, _____, 18, _____, _____, 21

14. Which cup holds more milk, **A** or **B**?

$$\begin{array}{r} 15. \quad 9 \\ + 5 \\ \hline \end{array}$$

$$\begin{array}{r} 16. \quad 5 \\ - 5 \\ \hline \end{array}$$

17. $2 + 2 + 2 =$

$18. 5 + 0 =$

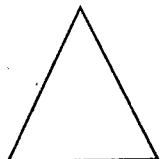
$$\begin{array}{r} 19. \quad 5 \\ 5 \\ + 5 \\ \hline \end{array}$$

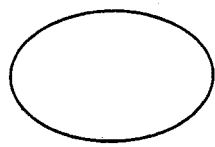
20. Which line is straight? _____




B. _____

Name the shapes.

21.  _____

22.  _____

23.  _____

(square, rectangle, oval, triangle)

24. Which tree is shorter, **A** or **B**? _____



$$\begin{array}{r} 25. \quad 30 \\ + 40 \\ \hline \end{array}$$

$$\begin{array}{r} 26. \quad 20 \\ - 10 \\ \hline \end{array}$$

Fill in the missing numbers.

$$27. \quad \square + 6 = 10$$

$$28. \quad 11 + \square = 18$$

$$29. \quad \begin{array}{r} \square \\ + 6 \\ \hline 12 \end{array}$$

$$30. \quad \begin{array}{r} 19 \\ - 6 \\ \hline \end{array}$$

31. One week has _____ days.

$$32. \quad \begin{array}{r} 4 \\ + \square \\ \hline \end{array}$$

33. Three girls have _____ eyes.

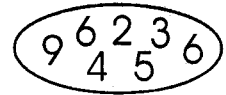
$$34. \quad 5 + 5 + 5 =$$

Subtract

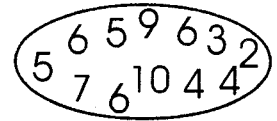
$$35. \quad \begin{array}{c} \text{Car} \quad \text{Car} \quad \text{Car} \\ \hline - \quad \text{Car} \quad \text{Car} \\ \hline \end{array} =$$

$$36. \quad \begin{array}{c} \text{Bottle} \quad \text{Bottle} \quad \text{Bottle} \quad \text{Bottle} \\ \hline - \quad \text{Bottle} \quad \text{Bottle} \\ \hline \end{array} =$$

37. Circle number 5



38. Circle number 10



Which number is smaller ?

39. 2 or 5 ? _____

40. 8 or 9 ? _____

Match the number with the correct number of items.

41. 5



42. 6



43. 2



44. 8



45. Complete. 10, 20, 30, 40, _____

46.

$$\begin{array}{r} 70 \\ - 40 \\ \hline \end{array}$$

47.

$$\begin{array}{r} 9 \\ - 0 \\ \hline \end{array}$$

48. $2 + 2 + 2 =$ 49.

$$\begin{array}{r} 50 \\ - 40 \\ \hline \end{array}$$

50. Who is taller, Juma or David? _____



Juma



David



SOLUTION TRIAL EXAMS 2017

Standard One



NAME SCHOOL DATE

ENGLISH

Dictation.

1. _____
2. _____
3. _____
4. _____
5. _____

Write well.

6. byba -
7. ndha -
8. neni -
9. doar -

Fill in the missing letters.

10. ho ___ s ___
11. cl _____
12. l ___ g
13. sh ___ r ___
14. b ___ d

One

Many

15. girl -
16. horse -
17. shirt -
18. tree -

Write in capital letters.

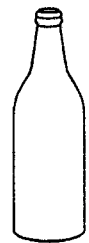
19. oven -
20. town -
21. friend -
22. gate -

Name the pictures.

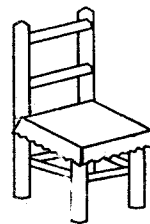
23.



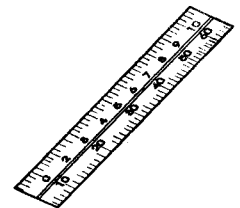
24.



25.



26.



Write in words.

27. 30 = _____


28. 9 = _____

29. 15 = _____

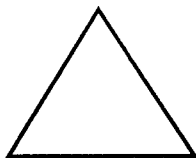
30. 4 = _____

Name the shapes.


31.



32.



33.



(square, circle, rectangle, triangle)

Write in small letters.

34. VISITOR -

35. WALL -

36. CRYING -

Write doing words.

37. run -

38. wash -

39. sleep -

Make words.

40. ma _____

41. fi _____

42. do _____

Remove '-ing'.


43. digging -

44. making -

45. cleaning -


Draw

46.



cat

47.



tree

Complete the sentences.

48. My name is _____

49. I am _____ years old.

50. My school is called _____



JAWABU LA MAJARIBIO 2017

Darasa la Kwanza



JINA SHULE TAREHE

KISWAHILI

Imla.

1. _____
2. _____
3. _____
4. _____
5. _____

Andika vizuri.

6. mbanyu -
7. zame -
8. doleki -
9. ungo -

Jaza pengo.

10. mf ___ k ___
11. d ___ r ___ sh ___
12. y ___
13. h ___ p ___

Andika kwa wingi.


14. mguu -
15. kiti -
16. mtoto -
17. choo -

Andika kwa herufi kubwa.

18. tembea -
19. haraka -
20. pita -
21. mwalimu -

Andika majina ya picha.


22.



23.



24.



25.



Chora maumbo.

26. pembe tatu

27. duara

28. mstatili

Unda maneno.

29. me _____

30. ha _____

31. he _____

32. pu _____

Andika kwa maneno au nambari.

33. 9 - _____

34. 15 - _____

35. 20 - _____

36. Kumi na nane - _____

37. sita - _____

Kamilisha methali.

38. Haraka haraka haina _____.

39. Mtoto akililia wembe _____.

40. Mpanda ngazi _____.

(mpe, ugali, hushuka, baraka)

Andika kwa herufi ndogo.

41. KANISA -

42. NYAMA -

43. MITARO -

Andika kinyume.

44. baba -

45. mzuri -

46. juu -

Kamilisha sentensi.

47. Jina langu ni _____.

48. Nina miaka _____.

49. Mwalimu wangu huitwa _____.

50. Ninasoma katika shule ya _____.

SCIENCE

1. I have _____ eyes. **(2, 3, 1)**

2. Most plants are _____ in colour.
(green, white, blue)

3. A mango is a _____
(vegetable, plant, fruit)

4. The weather is _____
(cloudy, rainy, windy)



5. These are _____



(ears, balls, eyes)

6. I have _____ in my body.
(blood, honey, milk)

7. A _____ gives us honey.
(mosquito, butterfly, bee)

8. These are _____



(shorts, socks, shoes)

9. Hair is found on our _____
(stomach, legs, head)

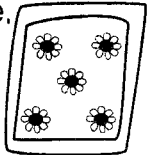
10. I have _____ toes on my legs.
(10, 5, 6)

11. This is a _____



(mango, pineapple, banana)

12. This is a _____ . It is used to wipe mucus from our nose.



(blanket, handkerchief, duster)

13. We should keep our _____ short.
(hair, legs, nails)

14. Dirty hair keeps _____
(flies, lice, bedbugs)

15. Which animal lives in the forest?
_____ **(Camel, Goat, Lion)**


16. Blood is _____ in colour.
(red, blue, purple)

17. We can see the _____ at night.
(moon, sun, light)

18. We should brush our _____ after every meal.
(shoes, feeth, hair)

19. _____ are bad for our teeth.
(Sweets, Carrots, Cabbages)

20. The weather is _____



(rainy, calm, cloudy)

21. _____ cause diseases.
(Food, Water, Germs)

22. This is a dangerous small animal called _____



(a rat, a snake, an earthworm)

23. A _____ gives us milk.
(lion, donkey, cow)

24. This is a _____



(tree, leaf, branch)

25. We eat food with a _____
(spoon, stick, wire)

26. _____ give us shade.
(Posts, Trees, Poles)

27. We hear with our _____
(eyes, nose, ears)

28. This is a _____



(hand, leg, knee)

29. Which small animal causes malaria?
(Mosquito, Bee, Butterfly)

30. The weather is _____



(calm, windy, cloudy)

31. When we are hungry we eat _____
(soil, food, water)

32. Which of these is not a fruit?

(Seed, Orange, Mango)

33. This is a _____



(leg, hand, feet)

34. An ankle is found on the _____
(hand, head, leg)

35. We walk with our _____
(hands, knees, legs)

36. We comb our hair with a _____
(shoebrush, fork, comb)

37. We dry our body with a _____
after bathing.
(towel, handkerchief, duster)

38. What do we use to clean our teeth?
_____ (Toothpaste, Polish, Ink)

39. _____ can be used to brush
our teeth. (Maize cobs, Leaves,
Chewed sticks)

40. We should not share _____
(toys, food, handkerchiefs)

41. Dirty feet can keep _____
(lice, jiggers, bedbugs)

42. This is a _____ of a tree.



(flower, fruit, branch)

43. _____ are found in the soil.
(Leaves, Branches, Roots)


44. We eat the _____ of a carrot.
(stem, root, fruit)

45. This is the stem of a _____



(banana, cassava, sugarcane)

46. This is a _____ brush.



(shoe, tooth, hair)

47. A cow does not give us _____
(milk, eggs, meat)

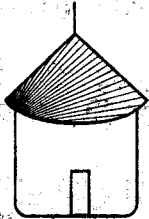
48. We eat food when we are _____
(thirsty, tired, hungry)



49. Food makes us grow _____
(healthy, weak, sick)

50. A cow moves by _____
(flying, swimming, walking)

NAME SCHOOL DATE

SOCIAL STUDIES

1. We live in _____
(homes, bushes, forests)
2. The mother of my father is my _____
(aunt, sister, grandmother)
3. This is a _____

(flat, hut, roof)
4. Our school is surrounded by a _____
(river, forest, fence)
5. Which animal lives in the forest?
_____ (Dog, Carmel, Lion)
6. Children go to school to _____
(learn, fight, sleep)
7. The weather is _____
(cloudy, sunny, rainy)
8. A place where food is prepared is called a _____
(bedroom, class, kitchen)
9. Which item is found in a classroom?
_____ (Cup, Duster, Blanket)
10. Which is a subject learnt in school?
(Cooking, Crying, Science)
11. Our flag has _____ colours.
(4, 3, 6)
12. A _____ cooks food at home.
(chief, mother, teacher)

13. Many trees make a _____

(farm, flower, forest)
14. We can store water in _____
(tanks, pipes, taps)
15. We should _____ our parents.
(obey, beat, ignore)
16. _____ teach us in school.
(Teachers, Parents, Prefects)
17. A _____ guards our houses against thieves.
(cow, goat, dog)
18. We wear _____ when going to school.
(uniforms, slippers, suits)
19. A person who sits next to me in class is my _____
(enemy, brother, neighbour)
20. Our president is called _____
(Raila, Ruto, Uhuru)
21. We can get water to drink from _____
(forests, rivers, bushes)
22. This is _____. It is used when it is raining.

(a house, an umbrella, a flower)
23. A place where children learn is called a _____
(classroom, bedroom, office)

24. Who among these is a member of my family?
(Friend, Teacher, Mother)

25. We should not accept gifts from
(strangers, parents, friends)

26. The weather is _____.



(cloudy, rainy, calm)

27. Food makes us _____.
(grow, weak, sick)

28. This is a _____.



(hut, shop, house)

29. Children write on _____ in school.
(books, the ground, bags)

30. We should _____ our books and bags.
(throw, take care of, fear)

C.R.E

31. _____ is our friend.
(Devil, Satan, Jesus)

32. God made the _____ to give us light at night.
(moon, clouds, sun)

33. God _____ obedient children.
(hates, loves, ignores)

34. Which item was not made by God?
(Stars, Trees, Road)

35. A _____ is the word of God.



(bible, book, storybook)

36. _____ is the son of God.
(Peter, James, Jesus)

37. The father of Isaac was called
(Abraham, Moses, Jacob)

38. Children should _____ their parents.
(beat, love, hate)

39. Jesus died on the _____.
(tree, post, cross)

40. God gave me _____ eyes to see with.
(4, 2, 10)

41. God called Samuel _____ times.
(3, 2, 6)

42. We go to church to _____.
(cry, fight, worship)

43. The earthly father of Jesus worked as a
(carpenter, priest, fisherman)

44. Jesus had _____ disciples.
(4, 12, 6)


45. _____ saw a burning bush.
(Joseph, Abraham, Moses)

46. Who walked on water? _____
(John, James, Peter)

47. God created the world in _____ days.
(6, 7, 8)

48. _____ is talking to God.
(Fighting, Praying, Screaming)

49. This is a _____.



(house, church, school)

50. What should we do when we are given a gift by our friends?
(Amen, Thank you, Nothing)

SOLUTION TRIAL EXAMS 2017

Standard One



NAME SCHOOL DATE

READING

Read these words.

- | | | | |
|-----------|------------|-----------|------------|
| 1. seven | 6. food | 11. taps | 16. wash |
| 2. stool | 7. baby | 12. shop | 17. finger |
| 3. class | 8. singing | 13. book | 18. yellow |
| 4. here | 9. read | 14. going | 19. tools |
| 5. father | 10. sit | 15. trees | 20. panga |

Read these sentences.

21. These are my mangoes.
22. My father has a car.
23. Let the children play.
24. I am making a kite.
25. This is my teacher.

KUSOMA

Soma maneno haya.

- | | | | |
|---------|----------|-----------|----------|
| 1. soma | 6. kata | 11. huku | 16. mawe |
| 2. lala | 7. uji | 12. kuku | 17. mti |
| 3. moto | 8. hapa | 13. macho | 18. kula |
| 4. meza | 9. kiti | 14. mama | 19. dawa |
| 5. maji | 10. simu | 15. kaka | 20. mate |

Soma sentensi hizi.

21. Huyu ni kuku.
22. Hawa ni mende.
23. Toa taka hapa.
24. Lala kwa kitanda.
25. Wewe ni mtoto.