

TARGETER WINGS EVALUATION TEST

STANDARD ONE - YEAR 2017

SCIENCE

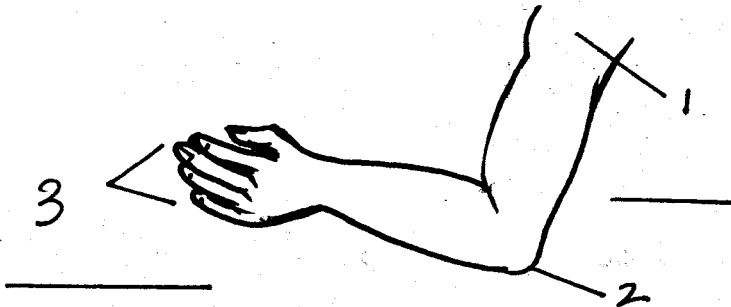
002



Date:

NAME SCHOOL

Name the parts of the arm.



(elbow, fingers, shoulder)

1. _____ 2. _____

3. _____

4. I have _____ ears.

(2, 5, 6)

5. We use a _____ to comb our hair.

(knife, spoon, comb)



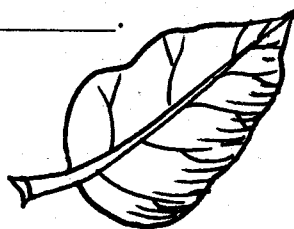
6. Our nails should be short and _____.

(dirty, clean, untidy)

7. I see with my _____.

(ears, hands, eyes)

8. This is a _____.



(tree, leaf, paper)

9. This is the the picture of a _____.



(cabbage, carrot, tomato)

10. After visiting the toilet, we wash our _____.

(legs, hands, ears)

11. A cow gives us meat and _____.

(milk, hands, ears)

12. We throw rubbish in the _____.

(latrine, dustbin, classroom)

Name the parts of the head.



13. _____ 14. _____

15. _____ 16. _____


17. _____

(eye, ear, nose, hair, mouth)

18. We should keep our bodies _____.

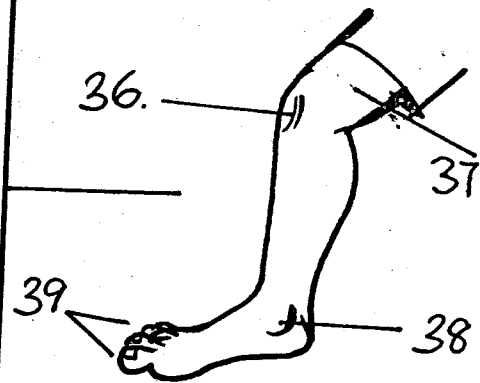
(clean, dirty, smelly)

19. The weather is _____.



- (cloudy, sunny, rainy)
20. A _____ is a vegetable.
(mango, cabbage, orange)
21. We hear with our _____.
(ears, mouth, hands)
22. Our _____ covers the head.
(wool, hair, eyes)
23. Wash your hands _____
eating food.
(before, after)
24. We wear _____ on our feet.
(scarf, gloves, shoes)
25. A bicycle has _____ wheels.
(1, 2, 3)
26. An insect has _____ legs.
(1, 3, 6)
27. Flowers smell _____.
(good, bad)
28. Plants grow in the _____.
(air, soil)
29. _____ is found on the face.
(Knee, Toes, Nose)
30. A dirty nose will attract _____.
(flies, ants, spiders)
31. Birds use _____ to fly.
(legs, wings, water)
32. _____ makes us wet.
(Sun, Rain, Clouds)
33. Ankle is found on the _____.
(arm, leg, face)
34. My hair is _____ in colour.
(white, red, black)
35. A _____ is a domestic animal.
(cat, lion, zebra)

Name the parts of a leg.



- (Toes, ankle, thigh, knee)
36. _____ 37. _____
38. _____ 39. _____
40. A hen has _____ legs.
(1, 3, 2)
41. We use a tongue to _____.
(taste, smell, see)
42. I breath through the _____.
(nose, mouth, ear)
43. Apples, Mangoes and
bananas are all _____.
(food, fruits, things)
44. At night, we see the _____.
(moon, sun)
45. The sky is _____ in colour.
(white, blue, black)
46. We keep _____ in the
kitchen.
(pangas, knives, jembes)
47. A lion lives in the _____.
(home, school, forest)
48. A bee gives us _____.
(meat, honey, milk)
49. _____ are not cooked.
(Maize, Fruits)
50. A snake has _____ legs.
(no, many)



**TARGETER WINGS
MWAKA - 2017**

002

KISWAHILI

Darasa la Kwanza

TAREHE:

JINA SHULE

Sehemu ya A. (Imla)

Andika maneno nitakayoyasema

1. _____
2. _____
3. _____
4. _____
5. _____

Sehemu ya B: Kuandika Wingi.

Andika wingi wa maneno yafuatayo.

6. kidole _____
7. goti _____
8. sikio _____
9. jino _____

10. mguu _____

Sehemu ya C: Kujaza mapengo ukitumia silabi.

Jaza pengo ukitumia silabi ulizopewa.

11. tu___ (nda, mba, ka)

12. m___zi (ki, za, pi)

13. ka___ta (po, sa, ma)

14. twi___(ga, pa, gi)

15. u___ku (bu, pi, si)

Sehemu ya D: Wakati

Andika maneno yafuatayo
katika wakati uliopita.

Kwa mfano: analia -alilia

16. anakula _____
17. anaoga _____
18. anaitwa _____
19. anatamani _____
20. anaweka _____

Sehemu ya E: Ufahamu

Soma hadithi kisha ujibu maswali.

Wezi walitokea sokoni. Walijaribu
kuiba mizigo. Watu wakawapiga na
kuwaumiza. Wezi wakakamatwa na
polisi. Muuguzi akawatibu.

21. Wezi walitokea _____
22. Wezi walijaribu kuiba

23. Wezi wakakamatwa
na _____
24. Watu waliwapiga
na _____
25. Ni nani aliyewatibu
wezi? _____

TARGETER WINGS
YEAR - 2017



002

ENGLISH
STD 1

DATE:

NAME SCHOOL

Part A: Dictation

Write the words as the teacher says them.

1. _____
2. _____
3. _____
4. _____
5. _____

Part B: Writing in capital letters.


Write the following words in capital letters.

6. colour _____
7. table _____
8. school _____
9. home _____
10. stick _____


Part C: Matching words to the picture.

Match the words with the correct pictures.


11. sit



12. play



13. bell



14. church



15. book



Part D: circling the right word.

Circle the words with the following letters.

16. t mat play am
17. a met Tam sit
18. e mat is met
19. m met is sit
20. p pot cat cow

Part E: Comprehension.

Read the passage below and answer the questions.

Bike and Kite

Today Mike and Jane are at home.

Jane has a bike. Mike has a kite. They

play with the bike and kite. They run

to the lake. Mike is happy. Jane is

happy too.

21. Mike and Jane are at _____.

22. _____ has a bike.

23. _____ has a kite.

24. They run to the _____.

25. Mike and Jane are _____.

(sad, happy)

TARGETER WINGS EVALUATION TEST

STANDARD ONE - YEAR 2017

SOCIAL STUDIES/ C.R.E


002



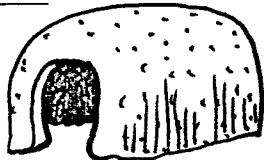
Date:

NAME SCHOOL

1. _____ is the head of a family.
(Children, Father, Mother)
2. We need _____ to grow.
(food, house, car)
3. Our flag has _____ colours.



- (3, 1, 4)
4. A house is also called _____.
(box, place, shelter)
 5. A _____ is a place where we live.
(tree, home, hole)
 6. This is a _____



- (hut, hole, manyatta)
7. The roof of a hut is made of _____



- (grass, mud, stones)
8. A house is divided into parts called _____.
(windows, rooms)
 9. Houses protect us from _____.
(soil, rain, food)

Match correctly with where it's found.



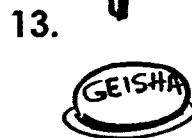
kitchen



bathroom



sitting room



bedroom

14. This is a _____



(well, road, river)

15. I am a girl. My mother is a _____

(sister, girl, boy)

16. A _____ is a fruit.

(yam, orange, arrowroot)

17. Mother, father and children make up a _____ family.

(nuclear, extended)

18. A manyatta house is made up of sticks, mud and _____

(cowdung, cement)

19. Glasses are used in building _____ house.

(traditional, modern)

20. Another name of mabati is _____

(roof, ironsheets, stones)

21. A place where grains are stored is called _____

(hut, granary, garage)

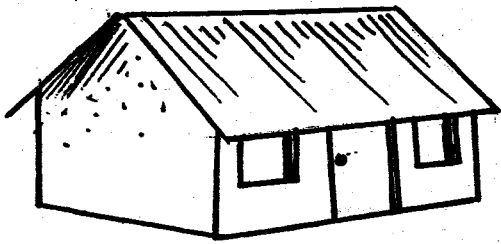
22. We wash our bodies in the

(kitchen, bedroom,
bathroom)

23. Maasai people live in the

(hut, manyatta)

24. The roof of a modern house is
made of _____



25. We use sand for building
the _____ of a modern
house.

(roof, wall, window)

26. Wild animals live in the _____

(forest, home,)

27. In school we learn how to

(eat, write, fight)

28. The walls of our classroom
are made of _____

(mud, cowdung, stones)

29. We can get water from
a _____

(hill, river, forest)

30. My name is _____

C.R.E

31. _____ created the world.
(God, Satan)

32. _____ was the mother of
Jesus.


(Sarah, Mary, Elizabeth)

33. Jesus had _____ disciples.
(10, 11, 12)

34. Jesus was born in _____.
(Bethlehem, Jerusalem,
Nazareth)

35. _____ created my eyes.
(Satan, Man, God)

36. This is a _____



(house, church, hole)

37. Before eating we should _____
(fight, play, pray)

38. We should _____ one another.
(love, laugh, fight)

39. _____ baptised Jesus.
(James, Peter, John)


40. Good people will go to _____.
(hell, heaven, satan)

41. We talk to God through _____
(prayers, games, song)

42. When I am given something I
should say _____
(sorry, thank you, good)

43. _____ created my parents.
(Adam, God, satan)

44. This is a _____



(cross, arrow, stick)

45. The father of Jesus was a

(teacher, farmer,
carpenter)

46. _____ built an ark.
(Abel, Noah, John)

47. _____ is the son of God.
(Jesus, satan, Peter)

48. We must _____ our parents.
(hate, abuse, obey)

49. Adam and Eve lived in the
garden of _____.

(Eden, Olive, Calvary)

50. _____ saw a burning bush.
(Joshua, Aaron, Moses)

TARGETER WINGS EVALUATION TEST

STANDARD ONE - YEAR 2017

MATHEMATICS

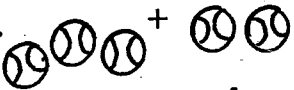


002

Date:

NAME SCHOOL

Count and write how many.

1.  = _____

2.  _____

Add

3. $5 + 7 =$ _____

4. $7 + 8 =$ _____

5. $10 + 0 =$ _____

6. $\begin{array}{r} 4 \\ +2 \\ \hline \end{array}$	7. $\begin{array}{r} 4 \\ +5 \\ \hline \end{array}$
-----------------------------------------------------	-----------------------------------------------------

8. $\begin{array}{r} 12 \\ +3 \\ \hline \end{array}$

9. $4 + 8 =$ _____

10. $1 + 9 =$ _____

11. $5 + 10 =$ _____

12. $5 + 5 =$ _____

13. $11 + 1 =$ _____

Take away

14. $\begin{array}{r} 5 \\ -4 \\ \hline \end{array}$	15. $\begin{array}{r} 8 \\ -7 \\ \hline \end{array}$
------------------------------------------------------	------------------------------------------------------

16. $\begin{array}{r} 17 \\ -11 \\ \hline \end{array}$

17. $\begin{array}{r} 10 \\ -0 \\ \hline \end{array}$

18. $7 - 5 =$ _____

19. $8 - 3 =$ _____

20. $14 - 6 =$ _____


21. $9 - 2 =$ _____

Name the shapes.

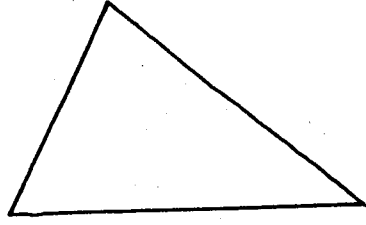
22.



23.



24.



(rectangle, triangle, circle)

Fill in the missing numbers.

25. 5, _____, _____, 8, _____, 10

26. 6, _____, 4, 3, _____, 1

27. $4 + \square = 6$

28. $\square + 3 = 7$

29. $7 + 4 + 3 = \underline{\hspace{2cm}}$

30. $3 + 1 + 4 = \underline{\hspace{2cm}}$

31. $2 + 5 + 1 = \underline{\hspace{2cm}}$

32. $3 + 0 + 3 = \underline{\hspace{2cm}}$

33. $18 - 5 = \underline{\hspace{2cm}}$

34. $16 - 2 = \underline{\hspace{2cm}}$

35. A cow has _____ legs.


Write in words.

36. 5 _____

37. 7 _____

38. 4 _____

39. Which are fewer?


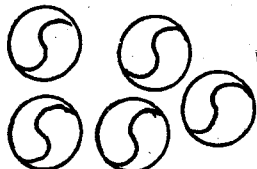


cups



spoons

40.




balls _____ trees _____

41. There are _____ months in a year.

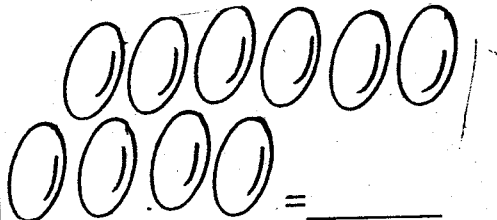
42. $5 + 3 + 2 = \underline{\hspace{2cm}}$

43. This is a _____ line.



(straight, wavy

44. Count and write how many.



45. 4 cows + 2 cows = _____ cows


46. 3 rats have _____ tails

47. Sunday, Monday, _____
(Wednesday, Tuesday)

48. I have _____ toes.

49. Write in words
10 _____.

50. Name the shape _____.



(circle, oval, triangle)



**TARGETER WINGS
YEAR - 2017**

002

Date:

NAME SCHOOL

**English Reading Exam - 2017
Class 1**

Read the story aloud to the teacher.

Ben has fish. Tom has yams.
They sit and eat Tom says, "I like fish" Ben says.
"I like fish too." Tom says, "you can eat fish and yams"
Ben and Tom eat fish and yams.

**Mtihani: Tusome
Darasa la 1**

Soma kwa sauti.

Abu na Kalulu ni marafiki. Wako katika darasa la kwanza katika shule ya msingi ya boresha. Kila Jumamosi wao hupenda kulala chini ya mti. Siku moja sifafu waliwauma sana. Hawakuwahi lala chini ya mti tena.