

SIGNAL EXAMS 2017

MATHEMATICS

NAME:	
SCHOOL:	

Arrange the numbers from the smallest to the biggest.

1. 68, 86, 56, 46, 26, _____.

2. 74, 94, 84, 44, 34 _____.

3. 12, 18, 29, 16, 26, _____.

4. 87, 48, 38, 92, 74, _____.

Match the numbers in figures and words.

5. 4 Nine

6. 3 Eight

7. 2 Four

8. 9 Three

9. 8 Two

Add the single digit numbers.

10. $2 + 3 + 4 =$

11. $1 + 4 + 2 =$

12. $2 + 2 + 2 =$

13. $3 + 3 + 3 =$

14. $1 + 2 + 3 =$

15. $3 + 4 + 1 =$

Write the numbers in words.

16. 8 - _____

17. 9 - _____

18. 7 - _____

19. 6 - _____

20. 4 - _____

21. $\begin{array}{r} 64 \\ +12 \\ \hline \end{array}$

22. $\begin{array}{r} 83 \\ +4 \\ \hline \end{array}$

23. $\begin{array}{r} 34 \\ +25 \\ \hline \end{array}$

24. $\begin{array}{r} 52 \\ +36 \\ \hline \end{array}$

25. $\begin{array}{r} 26 \\ +13 \\ \hline \end{array}$

26. $\begin{array}{r} 34 \\ +23 \\ \hline \end{array}$

© All rights reserved. No direct reprint or duplication or photocopying without the prior written permission of the publisher. Signal print and publishers, Nairobi

SIGNAL APRIL HOLIDAY HOMEWORK BOOKLETS all classes will be available at our exam distributors and leading bookshops countrywide as from 20th March 2017.

Fill in the missing numbers.

27. 24, _____, 28, _____ 32

28. 12, 14, _____, _____, 20

29. 4, _____, _____, 7, 8

30. 15, _____, 19, 21, _____

31.
$$\begin{array}{r} 96 \\ - 24 \\ \hline \\ \hline \end{array}$$

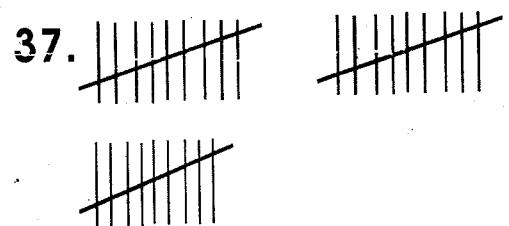
32.
$$\begin{array}{r} 87 \\ - 36 \\ \hline \\ \hline \end{array}$$

33.
$$\begin{array}{r} 86 \\ - 45 \\ \hline \\ \hline \end{array}$$

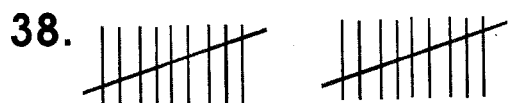
34.
$$\begin{array}{r} 64 \\ - 32 \\ \hline \\ \hline \end{array}$$

35.
$$\begin{array}{r} 64 \\ - 51 \\ \hline \\ \hline \end{array}$$

36.
$$\begin{array}{r} 72 \\ - 61 \\ \hline \\ \hline \end{array}$$



= _____ tens.



= _____ tens.



= _____ tens.

40. 27 = _____ tens _____ ones.

41. 33 = _____ tens _____ ones.

42. 94 = _____ tens _____ ones.

43. _____ = 2 tens 2 ones.

44. Write seventy three in symbols _____

45.
$$\begin{array}{r} 87 \\ - 6 \\ \hline \\ \hline \end{array}$$

46.
$$\begin{array}{r} 73 \\ - 2 \\ \hline \\ \hline \end{array}$$

47.
$$\begin{array}{r} 68 \\ - 6 \\ \hline \\ \hline \end{array}$$

48. $9 + \square = 15$

49. $\square + 8 = 16$

50. $26 - \square = 23$

Tusome Early Literacy Programme

Darasa la 1

Muhula wa 1

Mwisho wa Muhula

Jaribio la Kiswahili

Jina: _____

Shule: _____ Darasa: _____

Sehemu ya A: Imla.

1. _____
2. _____
3. _____
4. _____
5. _____

Sehemu ya B: Jaza Mapengo

Jaza mapengo kwa kutumia silabi hizi.

(bi, da, ti, to, go)

6. Mo _____
7. Kaima _____
8. _____ ti
9. _____ gaa
10. Za _____ bu

Sehemu ya C: Unda maneno matano kwa kutumia silabi hizi.

ma	ku	u	sa	ki	ba
si	li	na	bu	i	ha

11. _____
12. _____
13. _____
14. _____
15. _____

Sehemu ya D: Andika kwa wingi.

Umoja Wingi

16. Mtoto _____
17. Kaa _____

18. Debe _____

19. Godoro _____

20. Mzigo _____

Sehemu ya E: Andika kwa wakati uliopita.

Wakati uliopo Wakati Uliopita

21. Anakaa _____



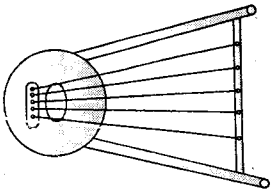
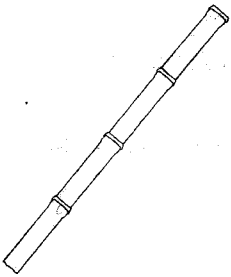

22. Anapika _____

23. Anacheza _____

24. Anaona _____

25. Analia _____

Sehemu ya F: Andika majina ya picha hizi.

	26. _____
	27. _____
	28. _____
	29. _____
	30. _____

Tusome Early Literacy Programme

Class 1

Term 1

End Term

English Test

Name: _____

School: _____ Class: _____

Part A: Dictation.

Write the words as the teacher reads them.

1. _____

2. _____

3. _____

4. _____

5. _____

Part B: Copy.

Copy the words two times.

6. Sit _____

7. Here _____

8. Tam _____

9. Let _____

10. I _____

Part C: Draw the pictures.

11. Tree

12. Cup

13. Sun	
14. Stick	
16. Socks	

Part E: Circle the words with the following letters.

m	set	mat	is
a	Sat	met	tim
t	Lit	am	Sam
e	Set	mat	sam
s	Bag	has	met

Part F: Write the sentences correctly.

27. saw the cat rat

28. a girl Michelle is

29. fish eat will we

30. Florence name my is

Part D: Writing

Write the following in capital letters.

17. I _____

18. e _____

19. s _____



20. t _____

21. m _____

SIGNAL EXAMS 2017

SCIENCE

NAME:	
SCHOOL:	


-  The weather is _____.
(sunny, windy, calm)
- The edible part of a carrot is the _____.
(stem root, leaf)
- _____ grows on our head.
(fingernails, hair, fingers)
- The _____ grow on the legs.
(toe nails, fingernails elbows)
- We can use a chewed stick to clean our _____.
(nose, tooth, head)
- The tongue is found inside the _____.
(stomach, mouth, toes)
- Lice are found in _____ hair.
(clean, dirty, tidy)
-  This is _____ fruit.
(mango, banana, pineapple)
- When it is _____, people carry umbrellas. (rainy, cloudy, calm)
- We open our _____ when eating food.
(teeth, mouth, legs)

11. I have _____ toes.
(10, 5, 20)

12. We use a clean _____ to remove the dirt in our ears.
(handkerchief, earbud, toothpick)


Draw these weather symbols

13.	14.	15.
Rainy	Cloudy	Sunny

- I have one _____.
(eye, ear, head)
- The _____ is not found on the head. (foot, nose, mouth)
-  This is a plant _____.
(flower, leaf, fruit)
- I have _____ lips. (2, 3 4)
- We use our legs to _____.
(hold, walk, eat)
- The neck helps the _____ to turn.
(head, hand, leg)

© All rights reserved. No direct reprint or duplication or photocopying without the prior written permission of the publisher. Signal print and publishers, Nairobi


SIGNAL APRIL HOLIDAY HOMEWORK BOOKLETS all classes will be available at our exam distributors and leading bookshops countrywide as from 20th March 2017.

22.  This is a plant _____.
(leaf, flower, root)

23. The roots of a plant grow in _____.
(air, water, soil)

24. I have _____ neck. (2.3,1)

25. We wash our hands after visiting the _____.
(school, church, toilet)


26.  This is a _____ plant.
(mango, sugarcane, maize)

27. We _____ the body to keep it clean.
(cut, wash, spray)

28. We eat the _____ of pineapples.
(fruits, leaves, roots)

29. _____ comes out of our body when we are cut.
(Wax, Blood, Mucus)

30. We eat the stem of a _____ plant.
(yams, sweet potato sugarcane)

31.  This part of the hand is called _____.
(finger, elbow, knee)


32. Dirty legs keep _____.
(houseflies, jiggers, lice)

33. We use the nose to _____.
(touch, smell, see)

34. We use the _____ to fold the leg.
(elbow, knee, feet)

35. We wash our body with _____.
(water, soil, milk)

36. The feet are part of the _____.
(leg, hand, head)
Name the plant parts.



37. _____

38. _____

39. _____

40. _____

41. _____

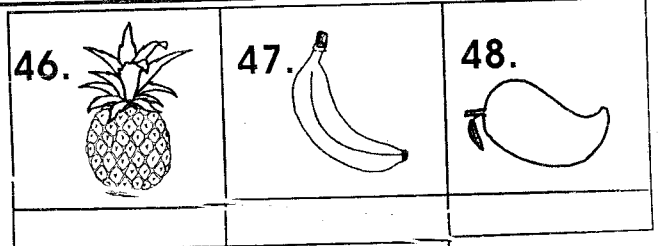
42. We fill balloon with _____.
(water, soil, air)

43. The teeth are _____.
(white, black, green)

44. The _____ is not a part of the plant.
(leaf, root, teeth)

45. We use our _____ to walk.
(legs, hands, head)

Name these fruits we eat.



(mango, pineapple, banana, watermelon)

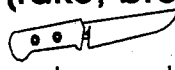
49. The leaves of plants are _____ in colour. (green, black, yellow)

50. The roots of plants grow in _____. (water, soil, air)

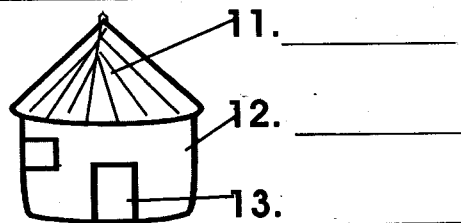
SIGNAL EXAMS 2017

SOCIAL STUDIES/RELIGIOUS EDUCATION

NAME:	
SCHOOL:	

- A home is a place where _____ live.
(animals, people, trees)
- We sweep the home compound using a _____.
(rake, broom, jembe)
-  We use a _____ to cut vegetables.
(knife, spoon, panga)
- If we play with fire we will get _____.
(sick, burnt, healthy)
- Jembes, rakes and slashes are kept in the _____.
(store, bathroom, kitchen)
- A _____ is not found in the sitting room.
(television, table, mattress)
- A maasai house is called a _____.
(hut, manyatta, shed)
- We sing the national anthem while _____.
(sleeping, standing, talking)
- When it is rainy, we hide ourselves in _____.
(houses, roads, rivers)
- A house has different _____.
(rooms, trees, roads)

Name the parts of the hut.



- _____
- _____
- _____
- (door, roof, window, wall)
- A manyatta is a _____ house.
(traditional, modern, permanent)
- The roof of a modern house is made of _____.
(grass, cowdung, iron sheets)
- _____ can be harmful to children.
(fire, food, clothes)
- Name any three sharp objects in the home.**
- _____
- _____
- _____
- Cups, glasses and spoons are found in the _____.
(kitchen, sitting room store)

© All rights reserved. No direct reprint or duplication or photocopying without the prior written permission of the publisher. Signal print and publishers, Nairobi

SIGNAL APRIL HOLIDAY HOMEWORK BOOKLETS all classes will be available at our exam distributors and leading bookshops countrywide as from 20th March 2017.

21. Timber is used to build the _____ of houses. **(walls roofs, thatch)**
22. _____ is a family celebration. **(Birthday, Labour day, Jamhuri day)**
23. A _____ is used to cook food. **(knife, pot, bowl)**
24. We use _____ to serve food. **(utensils, houses, brooms)**
25. Family members should _____ one another. **(hate, disobey, love)**
26. My father's sister is my _____. **(uncle, aunt, grandmother)**
27. Many houses built together make a _____. **(home, class, hospital)**

Draw the following.

28.	29.	30.
Table	Pot	Fork

C.R.E

31. _____ is a member of the extended family. **(Mother, Father, Grandmother)**
32. People who live near our homes are called _____. **(relatives, teachers, neighbours)**
33. God is happy when we _____ others. **(help, fight, gossip)**
34. We learn _____ values at school. **(good, bad, funny)**
35. At school, pupils should _____ their teachers. **(disobey, respect, fight)**
36. Jesus christ _____ children. **(hates, loves, abuses)**

37. God is our _____. **(enemy, friend, gossip)**
38. At home, I _____ with friends. **(smoke, steal, play)**
39. Jesus christ is _____ greatest gift to us. **(man's, friend's, God's)**
40. During christmas, we remember the _____ of Jesus. **(birth, death, ressurection)**
41. We should always worship _____. **(parents, friends, God)**
42.  This is a _____. **(leg, hand, head)**
43. I should _____ my family members. **(hate, love, disobey)**

Draw the following.

44. moon	45. star
46. sun	47. clouds

48. We should not receive _____ gifts. **(harmful good, nice)**
49. Jesus christ grew up in the town of _____. **(Nazareth, Bethlehem, Jerusalem)**
50. God gave me _____ to hear. **(eyes, ears, nose)**

Tusome Early Literacy Programme Class 1

Term 1

End Term

English Reading Test

Read these words.

- | | | |
|----------|---------|----------|
| 1. mat | 2. at | 3. let |
| 4. Tam | 5. met | 6. Sam |
| 7. here | 8. sit | 9. am |
| 10. is | 11. and | 12. play |
| 13. said | 14. I | 15. he |

Darasa la 1

Muhula wa 1

Mwisho wa Muhula

Jaribio la Kiswahili: Kusoma

Soma sentensi hizi.

1. Saumu alikula dagaa.
2. Jilo aliona jitu.
3. Wezi waliiba mizigo.

Soma hadithi hii fupi kwa ufasaha.

Zakayo anapenda maini. Mama atanunua maini na apike.