

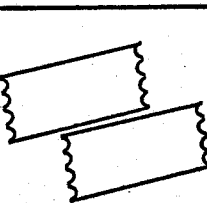


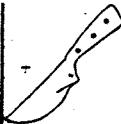




**SIGNAL EXAMS 2016**  
**SOCIAL STUDIES/RE**

**SIGNAL 003**

<b>NAME:</b>	
<b>SCHOOL:</b>	

- |  |  |
|--|--|
| <p>1. Collecting waste papers at home keeps the compound _____ (dirty, clean, untidy)</p> <p>2. Medicine should be kept away from _____ (houses, adults, children)</p> <p>3. Broken bottles around the compound should be _____ (burned, buried, thrown)</p> <p>4. _____ may be dangerous as it can burn us. (Water, Fire, Knife)</p> <p>5. A _____ home is good to live in. (safe, dirty, old)</p> <p>6. A home is a place where we _____ (learn, live, play)</p> <p><u>Name three materials used for building houses</u></p> <p>7. </p> <p>8. </p> <p>9. </p> <p>10. </p> <p>(stones, ironsheet, timber, sand)</p> | <p>11. The different parts of a house are called _____ (store, rooms, windows)</p> <p>12. A hut is a _____ house. (modern, traditional, permanent)</p> <p>13. We use a _____ to collect rubbish around the compound. (broom, panga, rake)</p> <p>14.  The walls of this house are built with _____ (grass, mud, cowdung)</p> <p>15. A modern house is thatched with _____ (grass, reeds, iron sheets)</p> <p>16. We prepare food in the _____ (bedroom, store, kitchen)</p> <p>17. A homestead is made up of many _____ we built together. (houses, roads, trees)</p> <p>18. Sheets and mattresses are found in the _____ (sitting room, bedroom, kitchen)</p> <p>19. We can store _____ in granaries. (meat, milk, grains)</p> <p>20. Strong houses are built with _____ (grass, stones, mud)</p> <p>21. The parents to my parents are my _____ (aunts, uncles, grandparents)</p> <p>22. Family members should relate with one another. (well, unfriendly, badly)</p> <p>23. We cook food in _____ (spoons, plates, pots)</p> |
|--|--|

24.  This tool found at home is used for \_\_\_\_\_ (cooking, cutting, sweeping)
25. Houses protect us from \_\_\_\_\_ animals. (domestic, dangerous, pet)
26. Chairs and tables are mostly found in the \_\_\_\_\_ (bedroom, sitting room, bathroom)
27. Father, mother and children are members of a \_\_\_\_\_ (school, family, church)
28. Family members take \_\_\_\_\_ when they become sick. (food, water, medicine)
29. The \_\_\_\_\_ provide for our basic needs. (teachers, parents, neighbours)
30. Family members should \_\_\_\_\_ one another. (hate, abuse, love)
- C.R.E**
31. God created everything in the world in \_\_\_\_\_ days. (six, seven, eight)
32. We should not accept \_\_\_\_\_ as gifts. (books, pens, drugs)
33. During Christmas we celebrate the \_\_\_\_\_ of Jesus. (death, birth, sufferings)
34. The wise men \_\_\_\_\_ Jesus. (worshipped, hated, denied)
35. The Holy \_\_\_\_\_ is a guide in our daily lives. (Bible, church, song)
36.  God created the \_\_\_\_\_ (clouds, trees, sun)
37. We should \_\_\_\_\_ God for the gift of Jesus Christ. (disobey, thank, hate)
38. God gave me \_\_\_\_\_ to see. (legs, eyes, hands)
39. I should \_\_\_\_\_ God for my family. (abuse, thank, disobey)
40. A church is a place where we to \_\_\_\_\_ (talk, worship, fight)
41. Adam and Eve were created by \_\_\_\_\_ (Jesus, God, mother)
42. We should read the bible \_\_\_\_\_ (always, weekly, monthly)
43. The mother of Jesus was called \_\_\_\_\_ (Martha, Hannah, Mary)
44. We \_\_\_\_\_ God when we take care of his creation. (annoy, please, hate)
45.  God created the \_\_\_\_\_ (sun, moon, stars)
46. God's greatest gift to us is \_\_\_\_\_ (food, Jesus Christ, trees)
47. Jesus was born in the town of \_\_\_\_\_ (Bethlehem, Nazareth, Judah)
48. Children are a gift from \_\_\_\_\_ (parents, God, angels)
49. The wise men came from the \_\_\_\_\_ (West, East, North)
50. I should \_\_\_\_\_ members of my family (respect, disobey, beat)

**SIGNAL EXAMS 2016**  
**MATHEMATICS**


**SIGNAL 003**

<b>NAME:</b>	
<b>SCHOOL:</b>	

**Write the numbers in words**

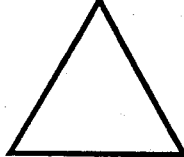
- 6 \_\_\_\_\_
- 7 \_\_\_\_\_
- 8 \_\_\_\_\_
- 2 \_\_\_\_\_

- 
  
= \_\_\_\_\_ tens

- 
  
= \_\_\_\_\_ tens

- $5 + \square = 9$
- $6 + \square = 11$
- $3 + \square = 7$
- $9 - \square = 4$
- $8 - \square = 3$
- $\square - 3 = 4$

- $3 + 4 + 1 = \underline{\hspace{2cm}}$
- $2 + 5 + 2 = \underline{\hspace{2cm}}$
- $6 + 2 + 1 = \underline{\hspace{2cm}}$
- $9 + 5 = \underline{\hspace{2cm}}$
- $8 + 7 = \underline{\hspace{2cm}}$
- $6 + 6 = \underline{\hspace{2cm}}$

- 
 This is a \_\_\_\_\_ shape. (rectangle, triangle, square)

- Add 16 to 32 = \_\_\_\_\_

**Match the numbers**

- $3 + 2$                        $1 + 4$
- $4 + 5$                        $1 + 8$
- $2 + 4$                        $2 + 3$
- $4 + 1$                        $4 + 2$
- $8 + 1$                        $5 + 4$

- Subtract 32 from 64 \_\_\_\_\_

$$\begin{array}{r} 20 \\ + 10 \\ \hline \end{array}$$

$$\begin{array}{r} 28. \quad 30 \\ + 40 \\ \hline \end{array}$$

$$\begin{array}{r} 10 \\ + 50 \\ \hline \end{array}$$

$$\begin{array}{r} 30. \quad 40 \\ + 50 \\ \hline \end{array}$$

$$\begin{array}{r} 31. \quad 30 \\ + 20 \\ \hline \\ \hline \end{array}$$

**Count and write how many**

$$32. \quad \begin{array}{c} \square \quad \square \\ \square \end{array} + \begin{array}{c} \square \quad \square \\ \square \quad \square \end{array} = \underline{\quad}$$

$$33. \quad 00000 + 0000 = \underline{\quad}$$

$$34. \quad \triangle \triangle \triangle \triangle \triangle \triangle \triangle = \underline{\quad}$$

$$\begin{array}{r} 35. \quad 64 \\ - 12 \\ \hline \\ \hline \end{array}$$

$$\begin{array}{r} 36. \quad 86 \\ - 72 \\ \hline \\ \hline \end{array}$$

$$\begin{array}{r} 37. \quad 46 \\ - 12 \\ \hline \\ \hline \end{array}$$

$$\begin{array}{r} 38. \quad 64 \\ - 13 \\ \hline \\ \hline \end{array}$$

$$39. \quad \text{Add 16 to 30} = \underline{\quad}$$

**Write in figures**

$$40. \quad \text{Eight} = \underline{\quad}$$

$$41. \quad \text{Sixty three} = \underline{\quad}$$

$$42. \quad \text{Thirty four} = \underline{\quad}$$


$$43. \quad \text{Eighteen} = \underline{\quad}$$

$$44. \quad \text{Forty five} = \underline{\quad}$$

$$45. \quad 48 + 11 = \underline{\quad}$$

$$46. \quad 26 + 30 = \underline{\quad}$$

47. Draw an oval shape.



**Arrange the numbers from the smallest to the largest**

$$48. \quad 28, 86, 42, 19, 48$$

$$49. \quad 92, 72, 80, 36, 46$$

$$50. \quad 59, 84, 72, 64, 95$$



**SIGNAL EXAMS 2016**

**SIGNAL 003**


**SCIENCE**

<b>NAME:</b>	
<b>SCHOOL:</b>	

**Name the parts of the body**



(leg, eye, mouth, hand)

5. When it is  we carry                      (vests, umbrellas, shorts)

6. A                      is a fruit we eat. (maize, bean, banana)


7. The                      are on my face. (feet, toes, eyes)

8. I have two                      (fingers, legs, teeth)

9. The holes on my nose are called                      (noses, nostrils, openings)

10. We can use a                      stick to brush our teeth. (long, short, chewed)

11. We should keep our toe nails                      (long, dirty, short)

12.  This is the                      of a plant. (stem, leaf, flower)

13. Sharing personal items is                      (good, bad, nice)

14.                      grows on our head. (Teeth, Nails, Hair)

15. We kneel down on our                      (elbows, knees, heads)

16. We can use                      to brush our teeth instead of toothpaste. (sugar, soil, salt)

17. Keeping our body clean is called                      (hygiene, bathing, sleeping)


18.                      are found on our fingers. (Toe nail, Finger nails, Teeth)

19. When we blow our nose,                      comes out. (blood, water, mucus)

20.  This is                      weather. (rainy, cloudy, calm)

21. We work with our                      (legs, hands, heads)

22. We eat food to become                      (weak, strong, sick)

23.  This is a                      fruit. (orange, lemon, banana)

24. The \_\_\_\_\_ holds the branches of a plant.  
(flower, leaf, stem)

25. We eat the \_\_\_\_\_ of kales. (roots, leaves, flowers)

26. New plants grows from \_\_\_\_\_ (flowers, seeds, fruits)

27. The \_\_\_\_\_ is found below the neck. (chest, head, nose)

28. When we bathe, our body becomes \_\_\_\_\_ (clean, smelly, dirty)

29. We wipe our body with a clean towel after \_\_\_\_\_ (visiting the toilet, sleeping, bathing)

**Draw these foods we eat**

30. Beans

31. Kales

32. Pineapple

33. Sugarcane

34. Yams

35. Banana

36. We clean our bodies with \_\_\_\_\_ and \_\_\_\_\_ (milk, water, soil, soap)

37. We eat the seeds of a plant. (maize, mango, grape)

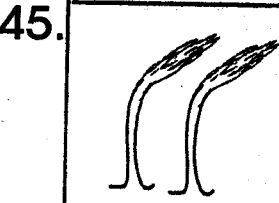

**Name any three parts of a plant**

- 38. \_\_\_\_\_
- 39. \_\_\_\_\_
- 40. \_\_\_\_\_

41. Plants give us \_\_\_\_\_ to eat. (food, dirt, water)

42. We should clean our body \_\_\_\_\_ (monthly, weekly, daily)

**Name the weather**



(calm, cloudy, windy, sunny)

46. Dirty \_\_\_\_\_ keep jiggers. (fingernails, toe nails, hair)

47. Brushing the teeth helps to remove \_\_\_\_\_ (dirt, water, blood)

48. I eat food through my \_\_\_\_\_ (head, mouth, hands)

49. People sweat more when it is \_\_\_\_\_ (cloudy, sunny, rainy)

50. The \_\_\_\_\_ is not found in the arm. (elbow, finger, toe)

**SIGNAL EXAMS 2016**

**SIGNAL 003**

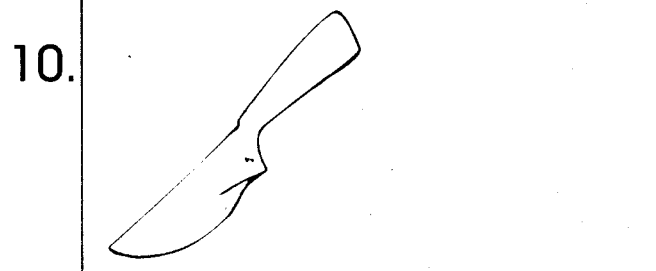
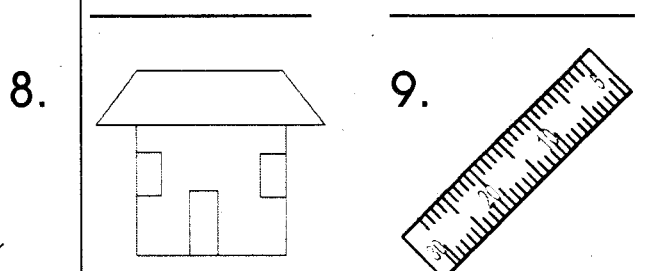

**KISWAHILI**

JINA:	
SHULE:	

**IMLA**

1. \_\_\_\_\_
2. \_\_\_\_\_
3. \_\_\_\_\_
4. \_\_\_\_\_
5. \_\_\_\_\_

**Andika majina ya picha hizi**



**(chungu, rula, birika, kisu, nyumba)**

**Andika kwa umoja au wingi**

	<u>Umoja</u>	<u>Wingi</u>
11.	_____	viti
12.	Kitabu	_____
13.	Nyumba	_____
14.	_____	milango
15.	Kisu	_____

**Kanusha**

16. Kimbia \_\_\_\_\_
17. Keti \_\_\_\_\_
18. Pika \_\_\_\_\_
19. Enda \_\_\_\_\_
20. Ongea \_\_\_\_\_

**Jaza pengo**

21. Mp \_\_\_\_\_ shi
22. R \_\_\_\_\_ dio
23. Emb \_\_\_\_\_
24. Ng \_\_\_\_\_ o

25. V \_\_\_\_\_ zi

**Andika kwa herufi kubwa**

26. Sufuria \_\_\_\_\_

27. Mahindi \_\_\_\_\_

28. Nyumba \_\_\_\_\_

29. Birika \_\_\_\_\_

30. Jumanne  
\_\_\_\_\_

**Tumia sifa ' \_ fupi'**

31. Mti \_\_\_\_\_

32. Kamba \_\_\_\_\_

33. Kiti \_\_\_\_\_

34. Mtoto \_\_\_\_\_

35. Nguo \_\_\_\_\_

**Andika maneno vizuri**

36. butaki \_\_\_\_\_

37. nioji \_\_\_\_\_

38. nacham \_\_\_\_\_

39. koso \_\_\_\_\_

40. mbowi \_\_\_\_\_

**Andika kwa wakati uliopita**

**(ii)**

41. Anaimba  
\_\_\_\_\_

42. Wanacheza  
\_\_\_\_\_

43. Mnasoma  
\_\_\_\_\_

44. Atakuja  
\_\_\_\_\_

45. Mama anapika  
\_\_\_\_\_

**Andika kinyume**

46. Mchana \_\_\_\_\_

47. Nje \_\_\_\_\_

48. Fupi \_\_\_\_\_  
(ndani, refu, usiku)

**Kamilisha sentensi**

49. Darasani, mwalimu  
hutumia \_\_\_\_\_  
kuandika ubaoni.  
(kalamu, chaki)

50. Sisi hulala kwenye  
\_\_\_\_\_  
(dirisha, kitanda)



## SIGNAL EXAMS 2016 ENGLISH

**SIGNAL 003**

<b>NAME:</b>	
<b>SCHOOL:</b>	

### DICTIONATION

1. \_\_\_\_\_
2. \_\_\_\_\_
3. \_\_\_\_\_
4. \_\_\_\_\_
5. \_\_\_\_\_

### Use "this is" or "these are"

6. \_\_\_\_\_ ripe bananas.
7. \_\_\_\_\_ my belt.
8. \_\_\_\_\_ our classrooms.
9. \_\_\_\_\_ my new boy.

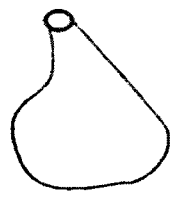



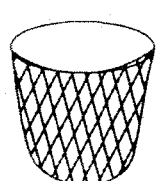
### Write in plural

10. Clock \_\_\_\_\_
11. Roof \_\_\_\_\_
12. Pan \_\_\_\_\_
13. Glass \_\_\_\_\_

### Write the words correctly

14. oock \_\_\_\_\_
15. seouh \_\_\_\_\_
16. rrommi \_\_\_\_\_
17. poons \_\_\_\_\_
18. tepla \_\_\_\_\_

### Name these pictures

19.  \_\_\_\_\_
20.  \_\_\_\_\_
21.  \_\_\_\_\_
22.  \_\_\_\_\_
23.  \_\_\_\_\_

(gumboot, dustbin, belt, gourd, kettle)

**Write in past tense**

- 24. Open \_\_\_\_\_
- 25. Talk \_\_\_\_\_
- 26. Fill \_\_\_\_\_
- 27. Bring \_\_\_\_\_
- 28. Apply \_\_\_\_\_

**Fill in the missing letters**

- 29. Sp \_\_\_\_\_ on
- 30. Gl \_\_\_\_\_ ss
- 31. P \_\_\_\_\_ n
- 32. Penc \_\_\_\_\_ l
- 33. P \_\_\_\_\_ t

**Use "am" "is" or "are"**

- 34. I \_\_\_\_\_ skipping a rope.
- 35. We \_\_\_\_\_ playing hide and seek.
- 36. He \_\_\_\_\_ sitting on a chair.
- 37. Jane \_\_\_\_\_ going to school.

**Write the opposite**


- 38. Close \_\_\_\_\_
  - 39. Cry \_\_\_\_\_
  - 40. Dirty \_\_\_\_\_
  - 41. Bright \_\_\_\_\_
- (clean, dull, open, laugh)**

**Write the words in capital letters**

- 42. door \_\_\_\_\_
- 43. blouse \_\_\_\_\_
- 44. rubbish \_\_\_\_\_
- 45. sweep \_\_\_\_\_
- 46. great \_\_\_\_\_

**Complete the sentences correctly.**

- 47. \_\_\_\_\_ books are these? **(who, whose)**
- 48. I saw \_\_\_\_\_ elephant **{a, an}**



These are \_\_\_\_\_ **(four, three)**

- 50. I am \_\_\_\_\_ years old.

<b>JINA:</b>	
<b>SHULE:</b>	

**Soma maneno yafuatayo**

1. Meza	8. Maua	15. Kaka
2. Mlango	9. Choo	16. Bendera
3. Mtoto	10. Ukuta	17. Babu
4. Yai	11. Nyeusi	18. Saa
5. Tunda	12. Ijumaa	19. Kifi
6. Ubao	13. Mwiko	20. Mlinzi
7. Dirisha	14. Uwanja	

**Soma sentensi hizi**

21. Mwalimu anaandika ubaoni.
22. Hii ni mila yangu.
23. Sisi huenda kucheza uwanjani.
24. Birika ina chai.
25. Mtoto anaenda shuleni.

<b>NAME:</b>	
<b>SCHOOL:</b>	

**Read the words**

1. Please	8. Jug	15. Walk
2. Spoon	9. Chair	16. Clock
3. Glass	10. Come	17. Bake
4. Flower	11. Father	18. Comb
5. Door	12. Leg	19. Vest
6. Jump	13. Hot	20. Clean
7. Roof	14. Red	

**Read these sentences**

21. The pupils are going to school.
22. She has a new dress.
23. Help me with your book.
24. Tom has a pet.
25. Her mother is cooking.