





11. C==C==C==C

12. D X D X D X


Draw




13. A cup



14. Plate




15. Pencil




16. Book


17. Rubber




18. Egg



19. Circle



20. girl



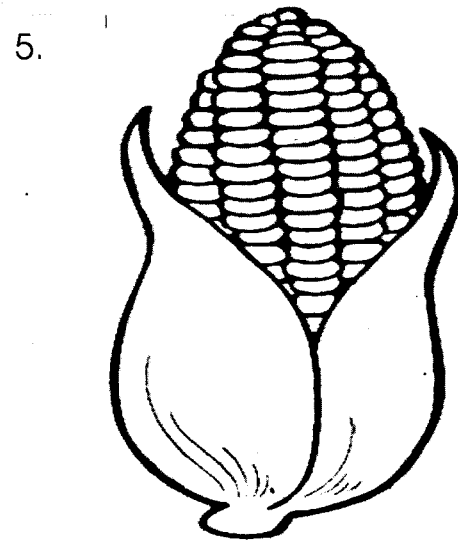
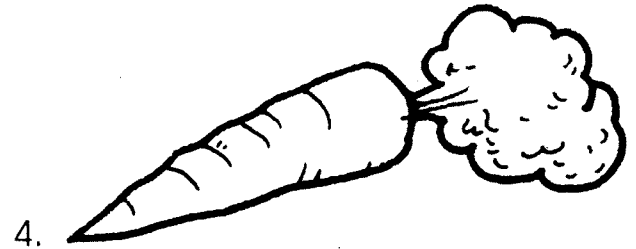






# HIGH FLYER SERIES TRIAL EXAMINATION NURSERY – 2016 ENVIRONMENTAL STUDIES

NAME: \_\_\_\_\_

CLASS: \_\_\_\_\_


Colour






6.

7. The weather is



8. This is a



9. it has \_\_\_\_\_ legs and

10. \_\_\_\_\_ eyes.










**HIGH FLYER SERIES TRIAL EXAMINATION  
NURSERY – 2016  
READING**

NAME: \_\_\_\_\_

CLASS: \_\_\_\_\_

**Read the following sounds and pictures.**



a

b

c

d

e

f

g

h

i

j

k

pi

jo

fa

ca

ra

si

to

va









**HIGH FLYER SERIES TRIAL EXAMINATION  
NURSERY – 2016  
READING**

NAME: \_\_\_\_\_

CLASS: \_\_\_\_\_

Read the following sounds and pictures.



a

b

c

d

e

f

g

h

i

j

k

pi

jo

fa

ca

ra

si

to

va





# HIGH FLYER SERIES TRIAL EXAMINATION


## NURSERY – 2016


### LANGUAGE


NAME: \_\_\_\_\_


CLASS: \_\_\_\_\_


#### Write the starting sound

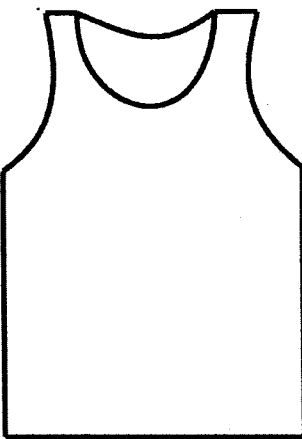
1.  \_\_\_\_\_

2.  \_\_\_\_\_

3.  \_\_\_\_\_

4.  \_\_\_\_\_

5.  \_\_\_\_\_

6.  \_\_\_\_\_

#### Make words

7. c + o = \_\_\_\_\_

8. d + a = \_\_\_\_\_

9. f + e = \_\_\_\_\_

10. h + i = \_\_\_\_\_

11. j + u = \_\_\_\_\_



**Write the missing sounds**

12. a \_\_\_ c \_\_\_ e \_\_\_ g

\_\_\_ i \_\_\_ k \_\_\_

13. m \_\_\_ o \_\_\_ q \_\_\_ s

\_\_\_ u \_\_\_ w x \_\_\_ z

14. **Write sounds a – z**

\_\_\_\_\_

\_\_\_\_\_

\_\_\_\_\_

\_\_\_\_\_

\_\_\_\_\_

\_\_\_\_\_

**Match**

15. A F

16. B E

17. C A

18. D B

19. E C

20. F D







# HIGH FLYER SERIES TRIAL EXAMINATION

## NURSERY - 2016

### NUMBER WORK



NAME: \_\_\_\_\_ CLASS: \_\_\_\_\_

#### 1. Write NUMBERS 1 to 20

\_\_\_\_\_

\_\_\_\_\_

\_\_\_\_\_

\_\_\_\_\_

\_\_\_\_\_

#### Write the missing numbers

2. 6 \_\_\_\_\_ 10

3. 7 8 9 \_\_\_\_\_ 11 \_\_\_\_\_

13 \_\_\_\_\_ 15

4. 9 10 \_\_\_\_\_ 12 \_\_\_\_\_ 14 \_\_\_\_\_

16 \_\_\_\_\_ 18 \_\_\_\_\_ 20

#### How many? Count and write

5. M M M M M M M M \_\_\_\_\_

6. G G G G G G G G \_\_\_\_\_

7. H H H H H H H H H H \_\_\_\_\_

8. D D D D D D D D D D \_\_\_\_\_

9. R R R R R R R R R R R R R R \_\_\_\_\_

#### Draw circles against the numbers (number value)

10. 7 \_\_\_\_\_

11. 9 \_\_\_\_\_

12. 8 \_\_\_\_\_

13. 5 \_\_\_\_\_

14. 12 \_\_\_\_\_

15. 6 \_\_\_\_\_



**Add**


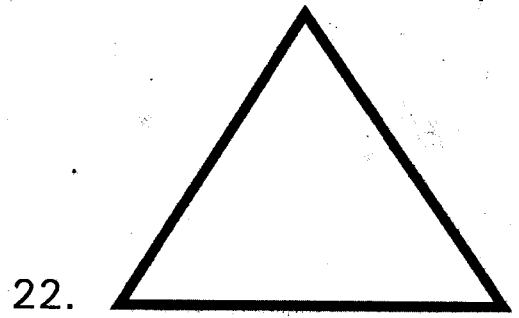


16.  $1 + 0 =$  \_\_\_\_\_

17.  $1 + 1 =$  \_\_\_\_\_

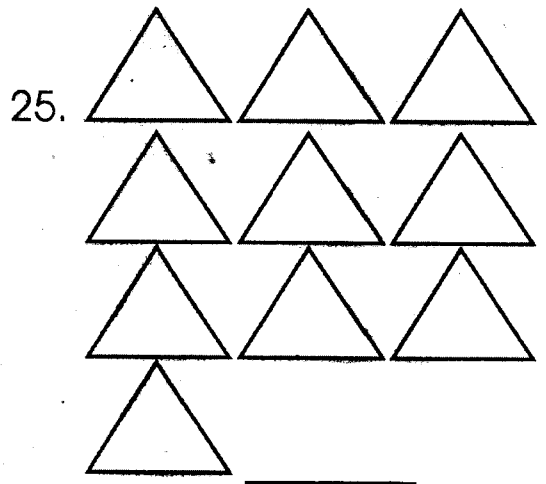
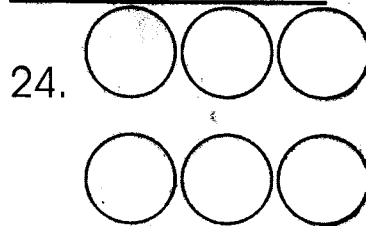
18.  $1 + 2 =$  \_\_\_\_\_

19.  $1 + 3 =$  \_\_\_\_\_

**Name the shapes by writing the first word**



**Count and write**


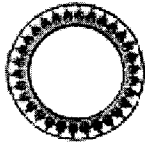











# HIGH FLYER SERIES TRIAL EXAMINATION

## NURSERY – 2016

### MARKING SCHEME

Number work	Environmental	Creative & Patterns	Language
1. 1 2 3 4 5 6 7 8 9 10 11 12 13 14 15 16 17 18 19	1. _____	1. _____	1. k
2. 7 8 9	2. _____	2. _____	2. l
3. 10 12 14	3. _____	3. _____	3. o
4. 11 13 15 17 19 20	4. _____	4. _____	4. t
5. 7	5. _____	5. _____	5. s
6. 8	6. _____	6. <i>mmmm</i>	6. v
7. 9	7. Sunny	7. <i>uuuuuuuu</i>	7. co
8. 10	8. Goat	8. A==A==A==A	8. da
9. 11	9. Four	9. B X B X B X	9. fe
10. 0 0 0 0 0 0 0	10. Two	10. ====+====+====	10. hi
11. 0 0 0 0 0 0 0 0 0		11. C==C==C==C	11. ju
12. 0 0 0 0 0 0 0 0		12. D X D X D X	12. bdfhjl
13. 0 0 0 0 0		13. 	13. nprtv
14. 0 0 0 0 0 0 0 0 0 0 0 0		14. 	14. abcdefghijkl mnopqrstuvwxyz
15. 0 0 0 0 0 0		15. 	15. A F
16. 1		16. 	16. B E
17. 2		17. 	17. C A
18. 3		18. 	18. D B
19. 4		19. 	19. E C
20. S		20. 	20. F D
21. t		20. 	
22. t			
23. r			
24. 6			
25. 10			